

# CHAPTER 3 DIFFERENTIATION

## 3.1 TANGENTS AND THE DERIVATIVE AT A POINT

1.  $P_1: m_1 = 1, P_2: m_2 = 5$

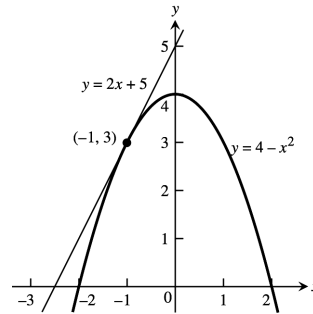
2.  $P_1: m_1 = -2, P_2: m_2 = 0$

3.  $P_1: m_1 = \frac{5}{2}, P_2: m_2 = -\frac{1}{2}$

4.  $P_1: m_1 = 3, P_2: m_2 = -3$

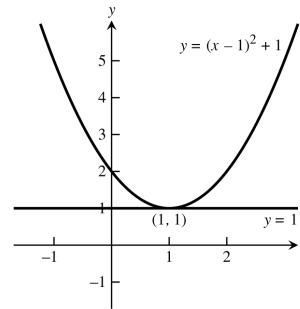
5. 
$$m = \lim_{h \rightarrow 0} \frac{[4 - (-1+h)^2] - [4 - (-1)^2]}{h}$$
  

$$= \lim_{h \rightarrow 0} \frac{-(1-2h+h^2)+1}{h} = \lim_{h \rightarrow 0} \frac{h(2-h)}{h} = 2;$$
  
 at  $(-1, 3)$ :  $y = 3 + 2(x - (-1)) \Rightarrow y = 2x + 5$ ,  
 tangent line



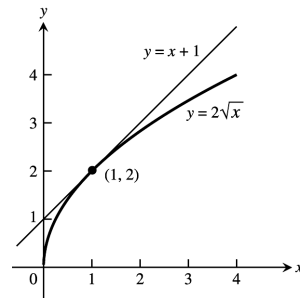
6. 
$$m = \lim_{h \rightarrow 0} \frac{[(1+h-1)^2 + 1] - [(1-1)^2 + 1]}{h} = \lim_{h \rightarrow 0} \frac{h^2}{h}$$
  

$$= \lim_{h \rightarrow 0} h = 0;$$
 at  $(1, 1)$ :  $y = 1 + 0(x - 1) \Rightarrow y = 1$ ,  
 tangent line



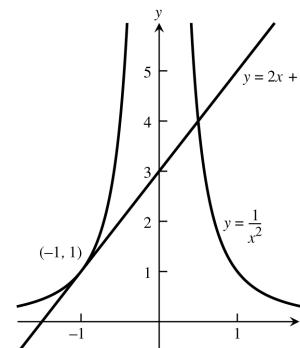
7. 
$$m = \lim_{h \rightarrow 0} \frac{2\sqrt{1+h} - 2\sqrt{1}}{h} = \lim_{h \rightarrow 0} \frac{2\sqrt{1+h} - 2}{h} \cdot \frac{2\sqrt{1+h} + 2}{2\sqrt{1+h} + 2}$$
  

$$= \lim_{h \rightarrow 0} \frac{4(1+h) - 4}{2h(\sqrt{1+h} + 1)} = \lim_{h \rightarrow 0} \frac{2}{\sqrt{1+h} + 1} = 1;$$
  
 at  $(1, 2)$ :  $y = 2 + 1(x - 1) \Rightarrow y = x + 1$ , tangent line



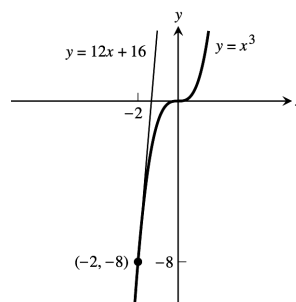
8. 
$$m = \lim_{h \rightarrow 0} \frac{\frac{1}{(-1+h)^2} - \frac{1}{(-1)^2}}{h} = \lim_{h \rightarrow 0} \frac{1 - (-1+h)^2}{h(-1+h)^2}$$
  

$$= \lim_{h \rightarrow 0} \frac{-(-2h+h^2)}{h(-1+h)^2} = \lim_{h \rightarrow 0} \frac{2-h}{(-1+h)^2} = 2;$$
  
 at  $(-1, 1)$ :  $y = 1 + 2(x - (-1)) \Rightarrow y = 2x + 3$ ,  
 tangent line



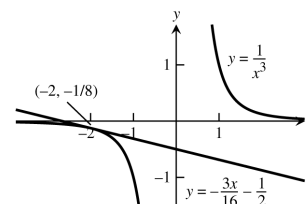
$$9. m = \lim_{h \rightarrow 0} \frac{(-2+h)^3 - (-2)^3}{h} = \lim_{h \rightarrow 0} \frac{-8 + 12h - 6h^2 + h^3 + 8}{h} \\ = \lim_{h \rightarrow 0} (12 - 6h + h^2) = 12;$$

at  $(-2, -8)$ :  $y = -8 + 12(x - (-2)) \Rightarrow y = 12x + 16$ ,  
tangent line



$$10. m = \lim_{h \rightarrow 0} \frac{\frac{1}{(-2+h)^3} - \frac{1}{(-2)^3}}{h} = \lim_{h \rightarrow 0} \frac{-8 - (-2+h)^3}{-8h(-2+h)^3} \\ = \lim_{h \rightarrow 0} \frac{-(12h - 6h^2 + h^3)}{-8h(-2+h)^3} = \lim_{h \rightarrow 0} \frac{12 - 6h + h^2}{8(-2+h)^3} \\ = \frac{12}{8(-8)} = -\frac{3}{16};$$

at  $(-2, -\frac{1}{8})$ :  $y = -\frac{1}{8} - \frac{3}{16}(x - (-2))$   
 $\Rightarrow y = -\frac{3}{16}x - \frac{1}{2}$ , tangent line



$$11. m = \lim_{h \rightarrow 0} \frac{[(2+h)^2 + 1] - 5}{h} = \lim_{h \rightarrow 0} \frac{(5 + 4h + h^2) - 5}{h} = \lim_{h \rightarrow 0} \frac{h(4+h)}{h} = 4;$$

at  $(2, 5)$ :  $y - 5 = 4(x - 2)$ , tangent line

$$12. m = \lim_{h \rightarrow 0} \frac{[(1+h) - 2(1+h)^2] - (-1)}{h} = \lim_{h \rightarrow 0} \frac{(1+h-2-4h-2h^2)+1}{h} = \lim_{h \rightarrow 0} \frac{h(-3-2h)}{h} = -3;$$

at  $(1, -1)$ :  $y + 1 = -3(x - 1)$ , tangent line

$$13. m = \lim_{h \rightarrow 0} \frac{\frac{3+h}{(3+h)^2} - \frac{3}{9}}{h} = \lim_{h \rightarrow 0} \frac{(3+h) - 3(h+1)}{h(h+1)} = \lim_{h \rightarrow 0} \frac{-2h}{h(h+1)} = -2;$$

at  $(3, 3)$ :  $y - 3 = -2(x - 3)$ , tangent line

$$14. m = \lim_{h \rightarrow 0} \frac{\frac{8}{(2+h)^2} - 2}{h} = \lim_{h \rightarrow 0} \frac{8 - 2(2+h)^2}{h(2+h)^2} = \lim_{h \rightarrow 0} \frac{8 - 2(4 + 4h + h^2)}{h(2+h)^2} = \lim_{h \rightarrow 0} \frac{-2h(4+h)}{h(2+h)^2} = \frac{-8}{4} = -2;$$

at  $(2, 2)$ :  $y - 2 = -2(x - 2)$

$$15. m = \lim_{h \rightarrow 0} \frac{(2+h)^3 - 8}{h} = \lim_{h \rightarrow 0} \frac{(8 + 12h + 6h^2 + h^3) - 8}{h} = \lim_{h \rightarrow 0} \frac{h(12 + 6h + h^2)}{h} = 12;$$

at  $(2, 8)$ :  $y - 8 = 12(t - 2)$ , tangent line

$$16. m = \lim_{h \rightarrow 0} \frac{[(1+h)^3 + 3(1+h)] - 4}{h} = \lim_{h \rightarrow 0} \frac{(1 + 3h + 3h^2 + h^3 + 3 + 3h) - 4}{h} = \lim_{h \rightarrow 0} \frac{h(6 + 3h + h^2)}{h} = 6;$$

at  $(1, 4)$ :  $y - 4 = 6(t - 1)$ , tangent line

$$17. m = \lim_{h \rightarrow 0} \frac{\sqrt{4+h} - 2}{h} = \lim_{h \rightarrow 0} \frac{\sqrt{4+h} - 2}{h} \cdot \frac{\sqrt{4+h} + 2}{\sqrt{4+h} + 2} = \lim_{h \rightarrow 0} \frac{(4+h) - 4}{h(\sqrt{4+h} + 2)} = \lim_{h \rightarrow 0} \frac{h}{h(\sqrt{4+h} + 2)} = \frac{1}{\sqrt{4} + 2} \\ = \frac{1}{4}; \text{ at } (4, 2): y - 2 = \frac{1}{4}(x - 4), \text{ tangent line}$$

$$18. m = \lim_{h \rightarrow 0} \frac{\sqrt{(8+h)+1} - 3}{h} = \lim_{h \rightarrow 0} \frac{\sqrt{9+h} - 3}{h} \cdot \frac{\sqrt{9+h} + 3}{\sqrt{9+h} + 3} = \lim_{h \rightarrow 0} \frac{(9+h) - 9}{h(\sqrt{9+h} + 3)} = \lim_{h \rightarrow 0} \frac{h}{h(\sqrt{9+h} + 3)} \\ = \frac{1}{\sqrt{9} + 3} = \frac{1}{6}; \text{ at } (8, 3): y - 3 = \frac{1}{6}(x - 8), \text{ tangent line}$$

$$19. \text{ At } x = -1, y = 5 \Rightarrow m = \lim_{h \rightarrow 0} \frac{5(-1+h)^2 - 5}{h} = \lim_{h \rightarrow 0} \frac{5(1 - 2h + h^2) - 5}{h} = \lim_{h \rightarrow 0} \frac{5h(-2+h)}{h} = -10, \text{ slope}$$

$$20. \text{ At } x = 2, y = -3 \Rightarrow m = \lim_{h \rightarrow 0} \frac{[1 - (2+h)^2] - (-3)}{h} = \lim_{h \rightarrow 0} \frac{(1 - 4h - h^2) + 3}{h} = \lim_{h \rightarrow 0} \frac{-h(4+h)}{h} = -4, \text{ slope}$$

$$21. \text{ At } x = 3, y = \frac{1}{2} \Rightarrow m = \lim_{h \rightarrow 0} \frac{\frac{1}{(3+h)-1} - \frac{1}{2}}{h} = \lim_{h \rightarrow 0} \frac{2 - (2+h)}{2h(2+h)} = \lim_{h \rightarrow 0} \frac{-h}{2h(2+h)} = -\frac{1}{4}, \text{ slope}$$

$$22. \text{ At } x = 0, y = -1 \Rightarrow m = \lim_{h \rightarrow 0} \frac{\frac{h-1}{h+1} - (-1)}{h} = \lim_{h \rightarrow 0} \frac{(h-1) + (h+1)}{h(h+1)} = \lim_{h \rightarrow 0} \frac{2h}{h(h+1)} = 2, \text{ slope}$$

$$23. \text{ At a horizontal tangent the slope } m = 0 \Rightarrow 0 = m = \lim_{h \rightarrow 0} \frac{[(x+h)^2 + 4(x+h) - 1] - (x^2 + 4x - 1)}{h} \\ = \lim_{h \rightarrow 0} \frac{(x^2 + 2xh + h^2 + 4x + 4h - 1) - (x^2 + 4x - 1)}{h} = \lim_{h \rightarrow 0} \frac{(2xh + h^2 + 4h)}{h} = \lim_{h \rightarrow 0} (2x + h + 4) = 2x + 4; \\ 2x + 4 = 0 \Rightarrow x = -2. \text{ Then } f(-2) = 4 - 8 - 1 = -5 \Rightarrow (-2, -5) \text{ is the point on the graph where there is a horizontal tangent.}$$

$$24. 0 = m = \lim_{h \rightarrow 0} \frac{[(x+h)^3 - 3(x+h)] - (x^3 - 3x)}{h} = \lim_{h \rightarrow 0} \frac{(x^3 + 3x^2h + 3xh^2 + h^3 - 3x - 3h) - (x^3 - 3x)}{h} \\ = \lim_{h \rightarrow 0} \frac{3x^2h + 3xh^2 + h^3 - 3h}{h} = \lim_{h \rightarrow 0} (3x^2 + 3xh + h^2 - 3) = 3x^2 - 3; 3x^2 - 3 = 0 \Rightarrow x = -1 \text{ or } x = 1. \text{ Then } \\ f(-1) = 2 \text{ and } f(1) = -2 \Rightarrow (-1, 2) \text{ and } (1, -2) \text{ are the points on the graph where a horizontal tangent exists.}$$

$$25. -1 = m = \lim_{h \rightarrow 0} \frac{\frac{1}{(x+h)-1} - \frac{1}{x-1}}{h} = \lim_{h \rightarrow 0} \frac{(x-1) - (x+h-1)}{h(x-1)(x+h-1)} = \lim_{h \rightarrow 0} \frac{-h}{h(x-1)(x+h-1)} = -\frac{1}{(x-1)^2} \\ \Rightarrow (x-1)^2 = 1 \Rightarrow x^2 - 2x = 0 \Rightarrow x(x-2) = 0 \Rightarrow x = 0 \text{ or } x = 2. \text{ If } x = 0, \text{ then } y = -1 \text{ and } m = -1 \\ \Rightarrow y = -1 - (x-0) = -(x+1). \text{ If } x = 2, \text{ then } y = 1 \text{ and } m = -1 \Rightarrow y = 1 - (x-2) = -(x-3).$$

$$26. \frac{1}{4} = m = \lim_{h \rightarrow 0} \frac{\sqrt{x+h} - \sqrt{x}}{h} = \lim_{h \rightarrow 0} \frac{\sqrt{x+h} - \sqrt{x}}{h} \cdot \frac{\sqrt{x+h} + \sqrt{x}}{\sqrt{x+h} + \sqrt{x}} = \lim_{h \rightarrow 0} \frac{(x+h) - x}{h(\sqrt{x+h} + \sqrt{x})} \\ = \lim_{h \rightarrow 0} \frac{h}{h(\sqrt{x+h} + \sqrt{x})} = \frac{1}{2\sqrt{x}}. \text{ Thus, } \frac{1}{4} = \frac{1}{2\sqrt{x}} \Rightarrow \sqrt{x} = 2 \Rightarrow x = 4 \Rightarrow y = 2. \text{ The tangent line is } \\ y = 2 + \frac{1}{4}(x-4) = \frac{x}{4} + 1.$$

$$27. \lim_{h \rightarrow 0} \frac{f(2+h) - f(2)}{h} = \lim_{h \rightarrow 0} \frac{(100 - 4.9(2+h)^2) - (100 - 4.9(2)^2)}{h} = \lim_{h \rightarrow 0} \frac{-4.9(4 + 4h + h^2) + 4.9(4)}{h} \\ = \lim_{h \rightarrow 0} (-19.6 - 4.9h) = -19.6. \text{ The minus sign indicates the object is falling } \underline{\text{downward}} \text{ at a speed of 19.6 m/sec.}$$

$$28. \lim_{h \rightarrow 0} \frac{f(10+h) - f(10)}{h} = \lim_{h \rightarrow 0} \frac{3(10+h)^2 - 3(10)^2}{h} = \lim_{h \rightarrow 0} \frac{3(20h + h^2)}{h} = 60 \text{ ft/sec.}$$

$$29. \lim_{h \rightarrow 0} \frac{f(3+h) - f(3)}{h} = \lim_{h \rightarrow 0} \frac{\pi(3+h)^2 - \pi(3)^2}{h} = \lim_{h \rightarrow 0} \frac{\pi[9 + 6h + h^2 - 9]}{h} = \lim_{h \rightarrow 0} \pi(6 + h) = 6\pi$$

$$30. \lim_{h \rightarrow 0} \frac{f(2+h) - f(2)}{h} = \lim_{h \rightarrow 0} \frac{\frac{4\pi}{3}(2+h)^3 - \frac{4\pi}{3}(2)^3}{h} = \lim_{h \rightarrow 0} \frac{\frac{4\pi}{3}[12h + 6h^2 + h^3]}{h} = \lim_{h \rightarrow 0} \frac{4\pi}{3}[12 + 6h + h^2] = 16\pi$$

$$31. \text{ At } (x_0, mx_0 + b) \text{ the slope of the tangent line is } \lim_{h \rightarrow 0} \frac{(m(x_0+h) + b) - (mx_0 + b)}{(x_0+h) - x_0} = \lim_{h \rightarrow 0} \frac{mh}{h} = \lim_{h \rightarrow 0} m = m. \\ \text{The equation of the tangent line is } y - (mx_0 + b) = m(x - x_0) \Rightarrow y = mx + b.$$

$$32. \text{ At } x = 4, y = \frac{1}{\sqrt{4}} = \frac{1}{2} \text{ and } m = \lim_{h \rightarrow 0} \frac{\frac{1}{\sqrt{4+h}} - \frac{1}{2}}{h} = \lim_{h \rightarrow 0} \left[ \frac{\frac{1}{\sqrt{4+h}} - \frac{1}{2}}{h} \cdot \frac{2\sqrt{4+h}}{2\sqrt{4+h}} \right] = \lim_{h \rightarrow 0} \left( \frac{2 - \sqrt{4+h}}{2h\sqrt{4+h}} \right) \\ = \lim_{h \rightarrow 0} \left[ \frac{2 - \sqrt{4+h}}{2h\sqrt{4+h}} \cdot \frac{2 + \sqrt{4+h}}{2 + \sqrt{4+h}} \right] = \lim_{h \rightarrow 0} \left( \frac{4 - (4+h)}{2h\sqrt{4+h}(2 + \sqrt{4+h})} \right) = \lim_{h \rightarrow 0} \left( \frac{-h}{2h\sqrt{4+h}(2 + \sqrt{4+h})} \right)$$

$$= \lim_{h \rightarrow 0} \left( \frac{-1}{2\sqrt{4+h}(2+\sqrt{4+h})} \right) = -\frac{1}{2\sqrt{4}(2+\sqrt{4})} = -\frac{1}{16}$$

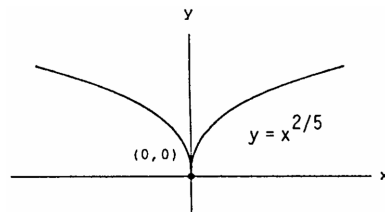
33. Slope at origin  $= \lim_{h \rightarrow 0} \frac{f(0+h)-f(0)}{h} = \lim_{h \rightarrow 0} \frac{h^2 \sin(\frac{1}{h})}{h} = \lim_{h \rightarrow 0} h \sin(\frac{1}{h}) = 0 \Rightarrow$  yes,  $f(x)$  does have a tangent at the origin with slope 0.

34.  $\lim_{h \rightarrow 0} \frac{g(0+h)-g(0)}{h} = \lim_{h \rightarrow 0} \frac{h \sin(\frac{1}{h})}{h} = \lim_{h \rightarrow 0} \sin \frac{1}{h}$ . Since  $\lim_{h \rightarrow 0} \sin \frac{1}{h}$  does not exist,  $f(x)$  has no tangent at the origin.

35.  $\lim_{h \rightarrow 0^-} \frac{f(0+h)-f(0)}{h} = \lim_{h \rightarrow 0^-} \frac{-1-0}{h} = \infty$ , and  $\lim_{h \rightarrow 0^+} \frac{f(0+h)-f(0)}{h} = \lim_{h \rightarrow 0^+} \frac{1-0}{h} = \infty$ . Therefore,  
 $\lim_{h \rightarrow 0} \frac{f(0+h)-f(0)}{h} = \infty \Rightarrow$  yes, the graph of  $f$  has a vertical tangent at the origin.

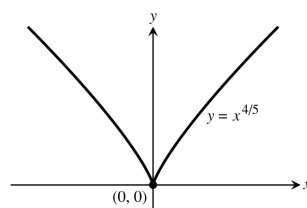
36.  $\lim_{h \rightarrow 0^-} \frac{U(0+h)-U(0)}{h} = \lim_{h \rightarrow 0^-} \frac{0-1}{h} = \infty$ , and  $\lim_{h \rightarrow 0^+} \frac{U(0+h)-U(0)}{h} = \lim_{h \rightarrow 0^+} \frac{1-1}{h} = 0 \Rightarrow$  no, the graph of  $f$  does not have a vertical tangent at  $(0, 1)$  because the limit does not exist.

37. (a) The graph appears to have a cusp at  $x = 0$ .



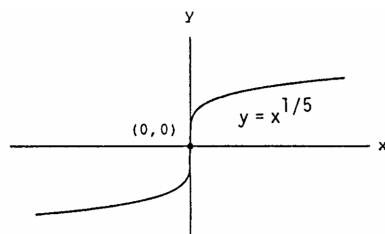
(b)  $\lim_{h \rightarrow 0^-} \frac{f(0+h)-f(0)}{h} = \lim_{h \rightarrow 0^-} \frac{h^{2/5}-0}{h} = \lim_{h \rightarrow 0^-} \frac{1}{h^{3/5}} = -\infty$  and  $\lim_{h \rightarrow 0^+} \frac{1}{h^{3/5}} = \infty \Rightarrow$  limit does not exist  
 $\Rightarrow$  the graph of  $y = x^{2/5}$  does not have a vertical tangent at  $x = 0$ .

38. (a) The graph appears to have a cusp at  $x = 0$ .



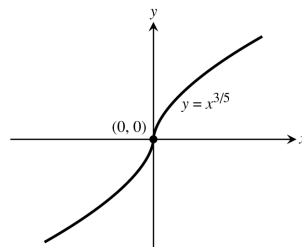
(b)  $\lim_{h \rightarrow 0^-} \frac{f(0+h)-f(0)}{h} = \lim_{h \rightarrow 0^-} \frac{h^{4/5}-0}{h} = \lim_{h \rightarrow 0^-} \frac{1}{h^{1/5}} = -\infty$  and  $\lim_{h \rightarrow 0^+} \frac{1}{h^{1/5}} = \infty \Rightarrow$  limit does not exist  
 $\Rightarrow y = x^{4/5}$  does not have a vertical tangent at  $x = 0$ .

39. (a) The graph appears to have a vertical tangent at  $x = 0$ .



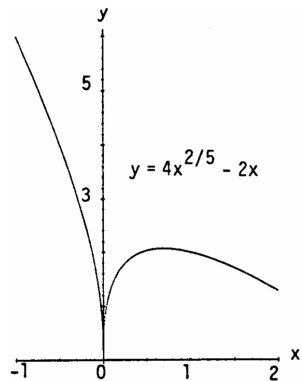
(b)  $\lim_{h \rightarrow 0} \frac{f(0+h)-f(0)}{h} = \lim_{h \rightarrow 0} \frac{h^{1/5}-0}{h} = \lim_{h \rightarrow 0} \frac{1}{h^{4/5}} = \infty \Rightarrow y = x^{1/5}$  has a vertical tangent at  $x = 0$ .

40. (a) The graph appears to have a vertical tangent at  $x = 0$ .



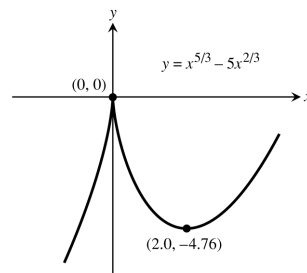
(b)  $\lim_{h \rightarrow 0} \frac{f(0+h)-f(0)}{h} = \lim_{h \rightarrow 0} \frac{h^{3/5}-0}{h} = \lim_{h \rightarrow 0} \frac{1}{h^{2/5}} = \infty \Rightarrow$  the graph of  $y = x^{3/5}$  has a vertical tangent at  $x = 0$ .

41. (a) The graph appears to have a cusp at  $x = 0$ .



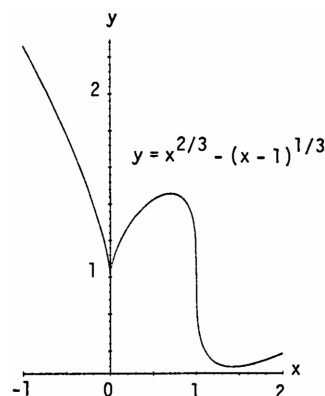
(b)  $\lim_{h \rightarrow 0^-} \frac{f(0+h)-f(0)}{h} = \lim_{h \rightarrow 0^-} \frac{4h^{2/5}-2h}{h} = \lim_{h \rightarrow 0^-} \frac{4}{h^{3/5}} - 2 = -\infty$  and  $\lim_{h \rightarrow 0^+} \frac{4}{h^{3/5}} - 2 = \infty$   
 $\Rightarrow$  limit does not exist  $\Rightarrow$  the graph of  $y = 4x^{2/5} - 2x$  does not have a vertical tangent at  $x = 0$ .

42. (a) The graph appears to have a cusp at  $x = 0$ .



(b)  $\lim_{h \rightarrow 0} \frac{f(0+h)-f(0)}{h} = \lim_{h \rightarrow 0} \frac{h^{5/3}-5h^{2/3}}{h} = \lim_{h \rightarrow 0} h^{2/3} - \frac{5}{h^{1/3}} = 0 - \lim_{h \rightarrow 0} \frac{5}{h^{1/3}}$  does not exist  $\Rightarrow$  the graph of  $y = x^{5/3} - 5x^{2/3}$  does not have a vertical tangent at  $x = 0$ .

43. (a) The graph appears to have a vertical tangent at  $x = 1$  and a cusp at  $x = 0$ .

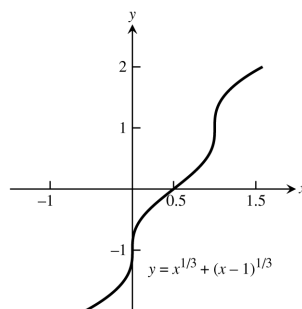


(b)  $x = 1$ :  $\lim_{h \rightarrow 0} \frac{(1+h)^{2/3} - (1+h-1)^{1/3} - 1}{h} = \lim_{h \rightarrow 0} \frac{(1+h)^{2/3} - h^{1/3} - 1}{h} = -\infty$   
 $\Rightarrow y = x^{2/3} - (x-1)^{1/3}$  has a vertical tangent at  $x = 1$ ;

$$x = 0: \lim_{h \rightarrow 0} \frac{f(0+h)-f(0)}{h} = \lim_{h \rightarrow 0} \frac{h^{2/3} - (h-1)^{1/3} - (-1)^{1/3}}{h} = \lim_{h \rightarrow 0} \left[ \frac{1}{h^{1/3}} - \frac{(h-1)^{1/3}}{h} + \frac{1}{h} \right]$$

does not exist  $\Rightarrow y = x^{2/3} - (x-1)^{1/3}$  does not have a vertical tangent at  $x = 0$ .

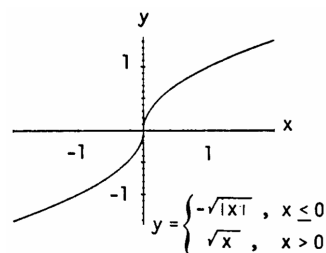
44. (a) The graph appears to have vertical tangents at  $x = 0$  and  $x = 1$ .



(b)  $x = 0: \lim_{h \rightarrow 0} \frac{f(0+h)-f(0)}{h} = \lim_{h \rightarrow 0} \frac{h^{1/3} + (h-1)^{1/3} - (-1)^{1/3}}{h} = \infty \Rightarrow y = x^{1/3} + (x-1)^{1/3}$  has a vertical tangent at  $x = 0$ ;

$x = 1: \lim_{h \rightarrow 0} \frac{f(1+h)-f(1)}{h} = \lim_{h \rightarrow 0} \frac{(1+h)^{1/3} + (1+h-1)^{1/3} - 1}{h} = \infty \Rightarrow y = x^{1/3} + (x-1)^{1/3}$  has a vertical tangent at  $x = 1$ .

45. (a) The graph appears to have a vertical tangent at  $x = 0$ .

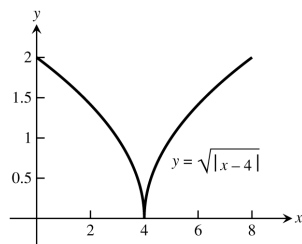


(b)  $\lim_{h \rightarrow 0^+} \frac{f(0+h)-f(0)}{h} = \lim_{h \rightarrow 0^+} \frac{\sqrt{h}-0}{h} = \lim_{h \rightarrow 0^+} \frac{1}{\sqrt{h}} = \infty$ ;

$\lim_{h \rightarrow 0^-} \frac{f(0+h)-f(0)}{h} = \lim_{h \rightarrow 0^-} \frac{-\sqrt{|h|}-0}{h} = \lim_{h \rightarrow 0^-} \frac{-\sqrt{|h|}}{-|h|} = \lim_{h \rightarrow 0^-} \frac{1}{\sqrt{|h|}} = \infty$

$\Rightarrow y$  has a vertical tangent at  $x = 0$ .

46. (a) The graph appears to have a cusp at  $x = 4$ .



(b)  $\lim_{h \rightarrow 0^+} \frac{f(4+h)-f(4)}{h} = \lim_{h \rightarrow 0^+} \frac{\sqrt{4-(4+h)}-0}{h} = \lim_{h \rightarrow 0^+} \frac{\sqrt{|h|}}{h} = \lim_{h \rightarrow 0^+} \frac{1}{\sqrt{h}} = \infty$ ;

$\lim_{h \rightarrow 0^-} \frac{f(4+h)-f(4)}{h} = \lim_{h \rightarrow 0^-} \frac{\sqrt{4-(4+h)}-0}{h} = \lim_{h \rightarrow 0^-} \frac{\sqrt{|h|}}{-|h|} = \lim_{h \rightarrow 0^-} \frac{-1}{\sqrt{|h|}} = -\infty$

$\Rightarrow y = \sqrt{4-x}$  does not have a vertical tangent at  $x = 4$ .

- 47-50. Example CAS commands:

Maple:

```
f := x -> x^3 + 2*x; x0 := 0;
plot( f(x), x=x0-1/2..x0+3, color=black,          # part (a)
      title="Section 3.1, #47(a)" );
q := unapply( (f(x0+h)-f(x0))/h, h );              # part (b)
```

```

L := limit( q(h), h=0 );          # part (c)
sec_lines := seq( f(x0)+q(h)*(x-x0), h=1..3 );    # part (d)
tan_line := f(x0) + L*(x-x0);
plot( [f(x),tan_line,sec_lines], x=x0-1/2..x0+3, color=black,
      linestyle=[1,2,5,6,7], title="Section 3.1, #47(d)",
      legend=["y=f(x)", "Tangent line at x=0", "Secant line (h=1)",
              "Secant line (h=2)", "Secant line (h=3)"] );

```

**Mathematica:** (function and value for x0 may change)

```

Clear[f, m, x, h]
x0 = p;
f[x_] := Cos[x] + 4Sin[2x]
Plot[f[x], {x, x0 - 1, x0 + 3}]
dq[h_] := (f[x0+h] - f[x0])/h
m = Limit[dq[h], h -> 0]
ytan = f[x0] + m(x - x0)
y1 = f[x0] + dq[1](x - x0)
y2 = f[x0] + dq[2](x - x0)
y3 = f[x0] + dq[3](x - x0)
Plot[{f[x], ytan, y1, y2, y3}, {x, x0 - 1, x0 + 3}]

```

### 3.2 THE DERIVATIVE AS A FUNCTION

- Step 1:  $f(x) = 4 - x^2$  and  $f(x + h) = 4 - (x + h)^2$

Step 2:  $\frac{f(x+h)-f(x)}{h} = \frac{[4 - (x+h)^2] - (4 - x^2)}{h} = \frac{(4 - x^2 - 2xh - h^2) - 4 + x^2}{h} = \frac{-2xh - h^2}{h} = \frac{h(-2x - h)}{h} = -2x - h$

Step 3:  $f'(x) = \lim_{h \rightarrow 0} (-2x - h) = -2x$ ;  $f'(-3) = 6$ ,  $f'(0) = 0$ ,  $f'(1) = -2$
- $F(x) = (x - 1)^2 + 1$  and  $F(x + h) = (x + h - 1)^2 + 1 \Rightarrow F'(x) = \lim_{h \rightarrow 0} \frac{[(x+h-1)^2 + 1] - [(x-1)^2 + 1]}{h}$

$= \lim_{h \rightarrow 0} \frac{(x^2 + 2xh + h^2 - 2x - 2h + 1 + 1) - (x^2 - 2x + 1 + 1)}{h} = \lim_{h \rightarrow 0} \frac{2xh + h^2 - 2h}{h} = \lim_{h \rightarrow 0} (2x + h - 2)$

$= 2(x - 1)$ ;  $F'(-1) = -4$ ,  $F'(0) = -2$ ,  $F'(2) = 2$
- Step 1:  $g(t) = \frac{1}{t^2}$  and  $g(t + h) = \frac{1}{(t+h)^2}$

Step 2:  $\frac{g(t+h)-g(t)}{h} = \frac{\frac{1}{(t+h)^2} - \frac{1}{t^2}}{h} = \frac{\left(\frac{t^2 - (t+h)^2}{(t+h)^2 \cdot t^2}\right)}{h} = \frac{t^2 - (t^2 + 2th + h^2)}{(t+h)^2 \cdot t^2 \cdot h} = \frac{-2th - h^2}{(t+h)^2 t^2 h}$

$= \frac{h(-2t - h)}{(t+h)^2 t^2 h} = \frac{-2t - h}{(t+h)^2 t^2}$

Step 3:  $g'(t) = \lim_{h \rightarrow 0} \frac{-2t - h}{(t+h)^2 t^2} = \frac{-2t}{t^2 \cdot t^2} = \frac{-2}{t^3}$ ;  $g'(-1) = 2$ ,  $g'(2) = -\frac{1}{4}$ ,  $g'(\sqrt{3}) = -\frac{2}{3\sqrt{3}}$
- $k(z) = \frac{1-z}{2z}$  and  $k(z + h) = \frac{1-(z+h)}{2(z+h)} \Rightarrow k'(z) = \lim_{h \rightarrow 0} \frac{\left(\frac{1-(z+h)}{2(z+h)} - \frac{1-z}{2z}\right)}{h}$

$= \lim_{h \rightarrow 0} \frac{(1-z-h)z - (1-z)(z+h)}{2(z+h)zh} = \lim_{h \rightarrow 0} \frac{z - z^2 - zh - z - h + z^2 + zh}{2(z+h)zh} = \lim_{h \rightarrow 0} \frac{-h}{2(z+h)zh} = \lim_{h \rightarrow 0} \frac{-1}{2(z+h)z}$

$= \frac{-1}{2z^2}$ ;  $k'(-1) = -\frac{1}{2}$ ,  $k'(1) = -\frac{1}{2}$ ,  $k'(\sqrt{2}) = -\frac{1}{4}$
- Step 1:  $p(\theta) = \sqrt{3\theta}$  and  $p(\theta + h) = \sqrt{3(\theta + h)}$

$$\begin{aligned}\text{Step 2: } \frac{p(\theta+h)-p(\theta)}{h} &= \frac{\sqrt{3(\theta+h)}-\sqrt{3\theta}}{h} = \frac{(\sqrt{3\theta+3h}-\sqrt{3\theta})}{h} \cdot \frac{(\sqrt{3\theta+3h}+\sqrt{3\theta})}{(\sqrt{3\theta+3h}+\sqrt{3\theta})} = \frac{(3\theta+3h)-3\theta}{h(\sqrt{3\theta+3h}+\sqrt{3\theta})} \\ &= \frac{3h}{h(\sqrt{3\theta+3h}+\sqrt{3\theta})} = \frac{3}{\sqrt{3\theta+3h}+\sqrt{3\theta}}\end{aligned}$$

$$\text{Step 3: } p'(\theta) = \lim_{h \rightarrow 0} \frac{3}{\sqrt{3\theta+3h}+\sqrt{3\theta}} = \frac{3}{\sqrt{3\theta}+\sqrt{3\theta}} = \frac{3}{2\sqrt{3\theta}}; p'(1) = \frac{3}{2\sqrt{3}}, p'(3) = \frac{1}{2}, p'\left(\frac{2}{3}\right) = \frac{3}{2\sqrt{2}}$$

$$\begin{aligned}6. \quad r(s) &= \sqrt{2s+1} \text{ and } r(s+h) = \sqrt{2(s+h)+1} \Rightarrow r'(s) = \lim_{h \rightarrow 0} \frac{\sqrt{2s+2h+1}-\sqrt{2s+1}}{h} \\ &= \lim_{h \rightarrow 0} \frac{(\sqrt{2s+2h+1}-\sqrt{2s+1})}{h} \cdot \frac{(\sqrt{2s+2h+1}+\sqrt{2s+1})}{(\sqrt{2s+2h+1}+\sqrt{2s+1})} = \lim_{h \rightarrow 0} \frac{(2s+2h+1)-(2s+1)}{h(\sqrt{2s+2h+1}+\sqrt{2s+1})} \\ &= \lim_{h \rightarrow 0} \frac{2h}{h(\sqrt{2s+2h+1}+\sqrt{2s+1})} = \lim_{h \rightarrow 0} \frac{2}{\sqrt{2s+2h+1}+\sqrt{2s+1}} = \frac{2}{\sqrt{2s+1}+\sqrt{2s+1}} = \frac{2}{2\sqrt{2s+1}} \\ &= \frac{1}{\sqrt{2s+1}}; r'(0) = 1, r'(1) = \frac{1}{\sqrt{3}}, r'\left(\frac{1}{2}\right) = \frac{1}{\sqrt{2}}\end{aligned}$$

$$\begin{aligned}7. \quad y &= f(x) = 2x^3 \text{ and } f(x+h) = 2(x+h)^3 \Rightarrow \frac{dy}{dx} = \lim_{h \rightarrow 0} \frac{2(x+h)^3-2x^3}{h} = \lim_{h \rightarrow 0} \frac{2(x^3+3x^2h+3xh^2+h^3)-2x^3}{h} \\ &= \lim_{h \rightarrow 0} \frac{6x^2h+6xh^2+2h^3}{h} = \lim_{h \rightarrow 0} \frac{h(6x^2+6xh+2h^2)}{h} = \lim_{h \rightarrow 0} (6x^2+6xh+2h^2) = 6x^2\end{aligned}$$

$$\begin{aligned}8. \quad r &= s^3 - 2s^2 + 3 \Rightarrow \frac{dr}{ds} = \lim_{h \rightarrow 0} \frac{((s+h)^3-2(s+h)^2+3)-(s^3-2s^2+3)}{h} = \lim_{h \rightarrow 0} \frac{s^3+3s^2h+3sh^2+h^3-2s^2-4sh-h^2+3-s^3+2s^2-3}{h} \\ &= \lim_{h \rightarrow 0} \frac{3s^2h+3sh^2+h^3-4sh-h^2}{h} = \lim_{h \rightarrow 0} \frac{h(3s^2+3sh+h^2-4s-h)}{h} = \lim_{h \rightarrow 0} (3s^2+3sh+h^2-4s-h) = 3s^2-2s\end{aligned}$$

$$\begin{aligned}9. \quad s &= r(t) = \frac{t}{2t+1} \text{ and } r(t+h) = \frac{t+h}{2(t+h)+1} \Rightarrow \frac{ds}{dt} = \lim_{h \rightarrow 0} \frac{\left(\frac{t+h}{2(t+h)+1}\right)-\left(\frac{t}{2t+1}\right)}{h} \\ &= \lim_{h \rightarrow 0} \frac{\frac{(t+h)(2t+1)-t(2t+2h+1)}{(2t+2h+1)(2t+1)}}{h} = \lim_{h \rightarrow 0} \frac{(t+h)(2t+1)-t(2t+2h+1)}{(2t+2h+1)(2t+1)h} \\ &= \lim_{h \rightarrow 0} \frac{2t^2+t+2ht+h-2t^2-2ht-t}{(2t+2h+1)(2t+1)h} = \lim_{h \rightarrow 0} \frac{h}{(2t+2h+1)(2t+1)h} = \lim_{h \rightarrow 0} \frac{1}{(2t+2h+1)(2t+1)} \\ &= \frac{1}{(2t+1)(2t+1)} = \frac{1}{(2t+1)^2}\end{aligned}$$

$$\begin{aligned}10. \quad \frac{dv}{dt} &= \lim_{h \rightarrow 0} \frac{\left[\frac{(t+h)-\frac{1}{t+h}}{h}\right]-\left(t-\frac{1}{t}\right)}{h} = \lim_{h \rightarrow 0} \frac{h-\frac{1}{t+h}+\frac{1}{t}}{h} = \lim_{h \rightarrow 0} \frac{\left(\frac{h(t+h)t-t+(t+h)}{(t+h)t}\right)}{h} \\ &= \lim_{h \rightarrow 0} \frac{ht^2+h^2t+h}{h(t+h)t} = \lim_{h \rightarrow 0} \frac{t^2+ht+1}{(t+h)t} = \frac{t^2+1}{t^2} = 1 + \frac{1}{t^2}\end{aligned}$$

$$\begin{aligned}11. \quad p &= f(q) = \frac{1}{\sqrt{q+1}} \text{ and } f(q+h) = \frac{1}{\sqrt{(q+h)+1}} \Rightarrow \frac{dp}{dq} = \lim_{h \rightarrow 0} \frac{\left(\frac{1}{\sqrt{(q+h)+1}}\right)-\left(\frac{1}{\sqrt{q+1}}\right)}{h} \\ &= \lim_{h \rightarrow 0} \frac{\left(\frac{\sqrt{q+1}-\sqrt{q+h+1}}{\sqrt{q+h+1}\sqrt{q+1}}\right)}{h} = \lim_{h \rightarrow 0} \frac{\sqrt{q+1}-\sqrt{q+h+1}}{h\sqrt{q+h+1}\sqrt{q+1}} \\ &= \lim_{h \rightarrow 0} \frac{(\sqrt{q+1}-\sqrt{q+h+1})}{h\sqrt{q+h+1}\sqrt{q+1}} \cdot \frac{(\sqrt{q+1}+\sqrt{q+h+1})}{(\sqrt{q+1}+\sqrt{q+h+1})} = \lim_{h \rightarrow 0} \frac{(q+1)-(q+h+1)}{h\sqrt{q+h+1}\sqrt{q+1}(\sqrt{q+1}+\sqrt{q+h+1})} \\ &= \lim_{h \rightarrow 0} \frac{-h}{h\sqrt{q+h+1}\sqrt{q+1}(\sqrt{q+1}+\sqrt{q+h+1})} = \lim_{h \rightarrow 0} \frac{-1}{\sqrt{q+h+1}\sqrt{q+1}(\sqrt{q+1}+\sqrt{q+h+1})} \\ &= \frac{-1}{\sqrt{q+1}\sqrt{q+1}(\sqrt{q+1}+\sqrt{q+1})} = \frac{-1}{2(q+1)\sqrt{q+1}}\end{aligned}$$

$$\begin{aligned}12. \quad \frac{dz}{dw} &= \lim_{h \rightarrow 0} \frac{\left(\frac{1}{\sqrt{3(w+h)-2}}-\frac{1}{\sqrt{3w-2}}\right)}{h} = \lim_{h \rightarrow 0} \frac{\sqrt{3w-2}-\sqrt{3w+3h-2}}{h\sqrt{3w+3h-2}\sqrt{3w-2}} \\ &= \lim_{h \rightarrow 0} \frac{(\sqrt{3w-2}-\sqrt{3w+3h-2})}{h\sqrt{3w+3h-2}\sqrt{3w-2}} \cdot \frac{(\sqrt{3w-2}+\sqrt{3w+3h-2})}{(\sqrt{3w-2}+\sqrt{3w+3h-2})} = \lim_{h \rightarrow 0} \frac{(3w-2)-(3w+3h-2)}{h\sqrt{3w+3h-2}\sqrt{3w-2}(\sqrt{3w-2}+\sqrt{3w+3h-2})} \\ &= \lim_{h \rightarrow 0} \frac{-3h}{h\sqrt{3w+3h-2}\sqrt{3w-2}(\sqrt{3w-2}+\sqrt{3w+3h-2})} = \lim_{h \rightarrow 0} \frac{-3}{\sqrt{3w-2}\sqrt{3w-2}(\sqrt{3w-2}+\sqrt{3w-2})} \\ &= \frac{-3}{2(3w-2)\sqrt{3w-2}}\end{aligned}$$



13.  $f(x) = x + \frac{9}{x}$  and  $f(x+h) = (x+h) + \frac{9}{(x+h)} \Rightarrow \frac{f(x+h)-f(x)}{h} = \frac{\left[(x+h) + \frac{9}{(x+h)}\right] - \left[x + \frac{9}{x}\right]}{h}$   
 $= \frac{x(x+h)^2 + 9x - x^2(x+h) - 9(x+h)}{x(x+h)h} = \frac{x^3 + 2x^2h + xh^2 + 9x - x^3 - x^2h - 9x - 9h}{x(x+h)h} = \frac{x^2h + xh^2 - 9h}{x(x+h)h}$   
 $= \frac{h(x^2 + xh - 9)}{x(x+h)h} = \frac{x^2 + xh - 9}{x(x+h)}; f'(x) = \lim_{h \rightarrow 0} \frac{x^2 + xh - 9}{x(x+h)} = \frac{x^2 - 9}{x^2} = 1 - \frac{9}{x^2}; m = f'(-3) = 0$
14.  $k(x) = \frac{1}{2+x}$  and  $k(x+h) = \frac{1}{2+(x+h)} \Rightarrow k'(x) = \lim_{h \rightarrow 0} \frac{k(x+h)-k(x)}{h} = \lim_{h \rightarrow 0} \frac{\left(\frac{1}{2+x+h} - \frac{1}{2+x}\right)}{h}$   
 $= \lim_{h \rightarrow 0} \frac{(2+x)-(2+x+h)}{h(2+x)(2+x+h)} = \lim_{h \rightarrow 0} \frac{-h}{h(2+x)(2+x+h)} = \lim_{h \rightarrow 0} \frac{-1}{(2+x)(2+x+h)} = \frac{-1}{(2+x)^2};$   
 $k'(2) = -\frac{1}{16}$
15.  $\frac{ds}{dt} = \lim_{h \rightarrow 0} \frac{[(t+h)^3 - (t+h)^2] - (t^3 - t^2)}{h} = \lim_{h \rightarrow 0} \frac{(t^3 + 3t^2h + 3th^2 + h^3) - (t^2 + 2th + h^2) - t^3 + t^2}{h}$   
 $= \lim_{h \rightarrow 0} \frac{3t^2h + 3th^2 + h^3 - 2th - h^2}{h} = \lim_{h \rightarrow 0} \frac{h(3t^2 + 3th + h^2 - 2t - h)}{h} = \lim_{h \rightarrow 0} (3t^2 + 3th + h^2 - 2t - h)$   
 $= 3t^2 - 2t; m = \left.\frac{ds}{dt}\right|_{t=-1} = 5$
16.  $\frac{dy}{dx} = \lim_{h \rightarrow 0} \frac{\frac{(x+h)+3}{1-(x+h)} - \frac{x+3}{1-x}}{h} = \lim_{h \rightarrow 0} \frac{\frac{(x+h+3)(1-x) - (x+3)(1-x-h)}{(1-x-h)(1-x)}}{h} = \lim_{h \rightarrow 0} \frac{x+h+3-x^2-xh-3x-x-3+x^2+3x+xh+3h}{h(1-x-h)(1-x)}$   
 $= \lim_{h \rightarrow 0} \frac{4h}{h(1-x-h)(1-x)} = \lim_{h \rightarrow 0} \frac{4}{(1-x-h)(1-x)} = \frac{4}{(1-x)^2}; \left.\frac{dy}{dx}\right|_{x=-2} = \frac{4}{(3)^2} = \frac{4}{9}$
17.  $f(x) = \frac{8}{\sqrt{x-2}}$  and  $f(x+h) = \frac{8}{\sqrt{(x+h)-2}} \Rightarrow \frac{f(x+h)-f(x)}{h} = \frac{\frac{8}{\sqrt{(x+h)-2}} - \frac{8}{\sqrt{x-2}}}{h}$   
 $= \frac{8(\sqrt{x-2} - \sqrt{x+h-2})}{h\sqrt{x+h-2}\sqrt{x-2}} \cdot \frac{(\sqrt{x-2} + \sqrt{x+h-2})}{(\sqrt{x-2} + \sqrt{x+h-2})} = \frac{8[(x-2) - (x+h-2)]}{h\sqrt{x+h-2}\sqrt{x-2}(\sqrt{x-2} + \sqrt{x+h-2})}$   
 $= \frac{-8h}{h\sqrt{x+h-2}\sqrt{x-2}(\sqrt{x-2} + \sqrt{x+h-2})} \Rightarrow f'(x) = \lim_{h \rightarrow 0} \frac{-8}{\sqrt{x+h-2}\sqrt{x-2}(\sqrt{x-2} + \sqrt{x+h-2})}$   
 $= \frac{-8}{\sqrt{x-2}\sqrt{x-2}(\sqrt{x-2} + \sqrt{x-2})} = \frac{-4}{(x-2)\sqrt{x-2}}; m = f'(6) = \frac{-4}{4\sqrt{4}} = -\frac{1}{2} \Rightarrow \text{the equation of the tangent}$   
line at (6, 4) is  $y - 4 = -\frac{1}{2}(x - 6) \Rightarrow y = -\frac{1}{2}x + 3 + 4 \Rightarrow y = -\frac{1}{2}x + 7$ .
18.  $g'(z) = \lim_{h \rightarrow 0} \frac{(1 + \sqrt{4-(z+h)}) - (1 + \sqrt{4-z})}{h} = \lim_{h \rightarrow 0} \frac{(\sqrt{4-z-h} - \sqrt{4-z})}{h} \cdot \frac{(\sqrt{4-z-h} + \sqrt{4-z})}{(\sqrt{4-z-h} + \sqrt{4-z})}$   
 $= \lim_{h \rightarrow 0} \frac{(4-z-h) - (4-z)}{h(\sqrt{4-z-h} + \sqrt{4-z})} = \lim_{h \rightarrow 0} \frac{-h}{h(\sqrt{4-z-h} + \sqrt{4-z})} = \lim_{h \rightarrow 0} \frac{-1}{(\sqrt{4-z-h} + \sqrt{4-z})} = \frac{-1}{2\sqrt{4-z}};$   
 $m = g'(3) = \frac{-1}{2\sqrt{4-3}} = -\frac{1}{2} \Rightarrow \text{the equation of the tangent line at (3, 2) is } w - 2 = -\frac{1}{2}(z - 3)$   
 $\Rightarrow w = -\frac{1}{2}z + \frac{3}{2} + 2 \Rightarrow w = -\frac{1}{2}z + \frac{7}{2}.$
19.  $s = f(t) = 1 - 3t^2$  and  $f(t+h) = 1 - 3(t+h)^2 = 1 - 3t^2 - 6th - 3h^2 \Rightarrow \frac{ds}{dt} = \lim_{h \rightarrow 0} \frac{f(t+h)-f(t)}{h}$   
 $= \lim_{h \rightarrow 0} \frac{(1 - 3t^2 - 6th - 3h^2) - (1 - 3t^2)}{h} = \lim_{h \rightarrow 0} (-6t - 3h) = -6t \Rightarrow \left.\frac{ds}{dt}\right|_{t=-1} = 6$
20.  $y = f(x) = 1 - \frac{1}{x}$  and  $f(x+h) = 1 - \frac{1}{x+h} \Rightarrow \frac{dy}{dx} = \lim_{h \rightarrow 0} \frac{f(x+h)-f(x)}{h} = \lim_{h \rightarrow 0} \frac{\left(1 - \frac{1}{x+h}\right) - \left(1 - \frac{1}{x}\right)}{h}$   
 $= \lim_{h \rightarrow 0} \frac{\frac{1}{x} - \frac{1}{x+h}}{h} = \lim_{h \rightarrow 0} \frac{h}{x(x+h)h} = \lim_{h \rightarrow 0} \frac{1}{x(x+h)} = \frac{1}{x^2} \Rightarrow \left.\frac{dy}{dx}\right|_{x=\sqrt{3}} = \frac{1}{3}$
21.  $r = f(\theta) = \frac{2}{\sqrt{4-\theta}}$  and  $f(\theta+h) = \frac{2}{\sqrt{4-(\theta+h)}} \Rightarrow \frac{dr}{d\theta} = \lim_{h \rightarrow 0} \frac{f(\theta+h)-f(\theta)}{h} = \lim_{h \rightarrow 0} \frac{\frac{2}{\sqrt{4-\theta-h}} - \frac{2}{\sqrt{4-\theta}}}{h}$   
 $= \lim_{h \rightarrow 0} \frac{2\sqrt{4-\theta} - 2\sqrt{4-\theta-h}}{h\sqrt{4-\theta}\sqrt{4-\theta-h}} = \lim_{h \rightarrow 0} \frac{2\sqrt{4-\theta} - 2\sqrt{4-\theta-h}}{h\sqrt{4-\theta}\sqrt{4-\theta-h}} \cdot \frac{(2\sqrt{4-\theta} + 2\sqrt{4-\theta-h})}{(2\sqrt{4-\theta} + 2\sqrt{4-\theta-h})}$

$$= \lim_{h \rightarrow 0} \frac{4(4-\theta) - 4(4-\theta-h)}{2h\sqrt{4-\theta}\sqrt{4-\theta-h}(\sqrt{4-\theta} + \sqrt{4-\theta-h})} = \lim_{h \rightarrow 0} \frac{2}{\sqrt{4-\theta}\sqrt{4-\theta-h}(\sqrt{4-\theta} + \sqrt{4-\theta-h})}$$

$$= \frac{2}{(4-\theta)(2\sqrt{4-\theta})} = \frac{1}{(4-\theta)\sqrt{4-\theta}} \Rightarrow \left. \frac{dr}{d\theta} \right|_{\theta=0} = \frac{1}{8}$$

$$22. w = f(z) = z + \sqrt{z} \text{ and } f(z+h) = (z+h) + \sqrt{z+h} \Rightarrow \frac{dw}{dz} = \lim_{h \rightarrow 0} \frac{f(z+h) - f(z)}{h}$$

$$= \lim_{h \rightarrow 0} \frac{(z+h + \sqrt{z+h}) - (z + \sqrt{z})}{h} = \lim_{h \rightarrow 0} \frac{h + \sqrt{z+h} - \sqrt{z}}{h} = \lim_{h \rightarrow 0} \left[ 1 + \frac{\sqrt{z+h} - \sqrt{z}}{h} \cdot \frac{(\sqrt{z+h} + \sqrt{z})}{(\sqrt{z+h} + \sqrt{z})} \right]$$

$$= 1 + \lim_{h \rightarrow 0} \frac{(z+h) - z}{h(\sqrt{z+h} + \sqrt{z})} = 1 + \lim_{h \rightarrow 0} \frac{1}{\sqrt{z+h} + \sqrt{z}} = 1 + \frac{1}{2\sqrt{z}} \Rightarrow \left. \frac{dw}{dz} \right|_{z=4} = \frac{5}{4}$$

$$23. f'(x) = \lim_{z \rightarrow x} \frac{f(z) - f(x)}{z - x} = \lim_{z \rightarrow x} \frac{\frac{1}{z+2} - \frac{1}{x+2}}{z - x} = \lim_{z \rightarrow x} \frac{(x+2) - (z+2)}{(z-x)(z+2)(x+2)} = \lim_{z \rightarrow x} \frac{x-z}{(z-x)(z+2)(x+2)} = \lim_{z \rightarrow x} \frac{-1}{(z+2)(x+2)} = \frac{-1}{(x+2)^2}$$

$$24. f'(x) = \lim_{z \rightarrow x} \frac{f(z) - f(x)}{z - x} = \lim_{z \rightarrow x} \frac{(z^2 - 3z + 4) - (x^2 - 3x + 4)}{z - x} = \lim_{z \rightarrow x} \frac{z^2 - 3z - x^2 + 3x}{z - x} = \lim_{z \rightarrow x} \frac{z^2 - x^2 - 3z + 3x}{z - x}$$

$$= \lim_{z \rightarrow x} \frac{(z-x)(z+x) - 3(z-x)}{z-x} = \lim_{z \rightarrow x} \frac{(z-x)[(z+x) - 3]}{z-x} = \lim_{z \rightarrow x} [(z+x) - 3] = 2x - 3$$

$$25. g'(x) = \lim_{z \rightarrow x} \frac{g(z) - g(x)}{z - x} = \lim_{z \rightarrow x} \frac{\frac{z}{z-1} - \frac{x}{x-1}}{z - x} = \lim_{z \rightarrow x} \frac{z(x-1) - x(z-1)}{(z-x)(z-1)(x-1)} = \lim_{z \rightarrow x} \frac{-z+x}{(z-x)(z-1)(x-1)} = \lim_{z \rightarrow x} \frac{-1}{(z-1)(x-1)} = \frac{-1}{(x-1)^2}$$

$$26. g'(x) = \lim_{z \rightarrow x} \frac{g(z) - g(x)}{z - x} = \lim_{z \rightarrow x} \frac{(1+\sqrt{z}) - (1+\sqrt{x})}{z - x} = \lim_{z \rightarrow x} \frac{\sqrt{z} - \sqrt{x}}{z - x} \cdot \frac{\sqrt{z} + \sqrt{x}}{\sqrt{z} + \sqrt{x}} = \lim_{z \rightarrow x} \frac{z - x}{(z-x)(\sqrt{z} + \sqrt{x})} = \lim_{z \rightarrow x} \frac{1}{\sqrt{z} + \sqrt{x}} = \frac{1}{2\sqrt{x}}$$

27. Note that as  $x$  increases, the slope of the tangent line to the curve is first negative, then zero (when  $x = 0$ ), then positive  $\Rightarrow$  the slope is always increasing which matches (b).

28. Note that the slope of the tangent line is never negative. For  $x$  negative,  $f'_2(x)$  is positive but decreasing as  $x$  increases. When  $x = 0$ , the slope of the tangent line to  $x$  is 0. For  $x > 0$ ,  $f'_2(x)$  is positive and increasing. This graph matches (a).

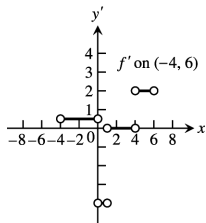
29.  $f_3(x)$  is an oscillating function like the cosine. Everywhere that the graph of  $f_3$  has a horizontal tangent we expect  $f'_3$  to be zero, and (d) matches this condition.

30. The graph matches with (c).

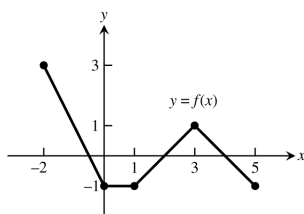
31. (a)  $f'$  is not defined at  $x = 0, 1, 4$ . At these points, the left-hand and right-hand derivatives do not agree.

For example,  $\lim_{x \rightarrow 0^-} \frac{f(x) - f(0)}{x - 0}$  = slope of line joining  $(-4, 0)$  and  $(0, 2) = \frac{1}{2}$  but  $\lim_{x \rightarrow 0^+} \frac{f(x) - f(0)}{x - 0}$  = slope of line joining  $(0, 2)$  and  $(1, -2) = -4$ . Since these values are not equal,  $f'(0) = \lim_{x \rightarrow 0} \frac{f(x) - f(0)}{x - 0}$  does not exist.

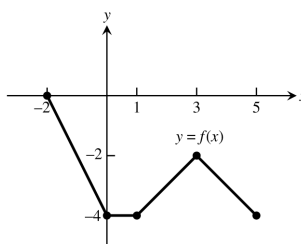
(b)



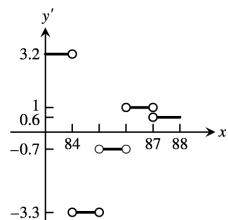
32. (a)



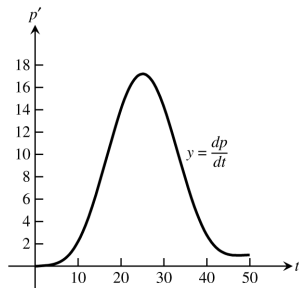
(b) Shift the graph in (a) down 3 units



33.



34. (a)


 (b) The fastest is between the 20<sup>th</sup> and 30<sup>th</sup> days;  
slowest is between the 40<sup>th</sup> and 50<sup>th</sup> days.

35. Answers may vary. In each case, draw a tangent line and estimate its slope.

(a) i) slope  $\approx 1.54 \Rightarrow \frac{dT}{dt} \approx 1.54^\circ \frac{F}{hr}$

ii) slope  $\approx 2.86 \Rightarrow \frac{dT}{dt} \approx 2.86^\circ \frac{F}{hr}$

iii) slope  $\approx 0 \Rightarrow \frac{dT}{dt} \approx 0^\circ \frac{F}{hr}$

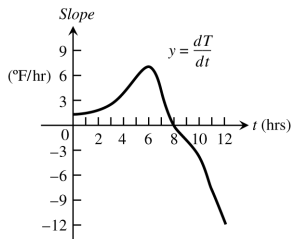
iv) slope  $\approx -3.75 \Rightarrow \frac{dT}{dt} \approx -3.75^\circ \frac{F}{hr}$

 (b) The tangent with the steepest positive slope appears to occur at  $t = 6 \Rightarrow 12$  p.m. and slope  $\approx 7.27 \Rightarrow \frac{dT}{dt} \approx 7.27^\circ \frac{F}{hr}$ .

 The tangent with the steepest negative slope appears to occur at  $t = 12 \Rightarrow 6$  p.m. and

slope  $\approx -8.00 \Rightarrow \frac{dT}{dt} \approx -8.00^\circ \frac{F}{hr}$

(c)



36. Answers may vary. In each case, draw a tangent line and estimate the slope.

(a) i) slope  $\approx -20.83 \Rightarrow \frac{dW}{dt} \approx -20.83 \frac{lb}{month}$

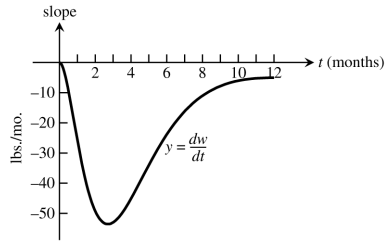
ii) slope  $\approx -35.00 \Rightarrow \frac{dW}{dt} \approx -35.00 \frac{lb}{month}$

iii) slope  $\approx -6.25 \Rightarrow \frac{dW}{dt} \approx -6.25 \frac{lb}{month}$

 (b) The tangent with the steepest positive slope appears to occur at  $t = 2.7$  months. and slope  $\approx 7.27$ 

$$\Rightarrow \frac{dW}{dt} \approx -53.13 \frac{lb}{month}$$

(c)



37. Left-hand derivative: For  $h < 0$ ,  $f(0+h) = f(h) = h^2$  (using  $y = x^2$  curve)  $\Rightarrow \lim_{h \rightarrow 0^-} \frac{f(0+h) - f(0)}{h}$

$$= \lim_{h \rightarrow 0^-} \frac{h^2 - 0}{h} = \lim_{h \rightarrow 0^-} h = 0;$$

Right-hand derivative: For  $h > 0$ ,  $f(0+h) = f(h) = h$  (using  $y = x$  curve)  $\Rightarrow \lim_{h \rightarrow 0^+} \frac{f(0+h) - f(0)}{h}$

$$= \lim_{h \rightarrow 0^+} \frac{h - 0}{h} = \lim_{h \rightarrow 0^+} 1 = 1;$$

Then  $\lim_{h \rightarrow 0^-} \frac{f(0+h) - f(0)}{h} \neq \lim_{h \rightarrow 0^+} \frac{f(0+h) - f(0)}{h} \Rightarrow$  the derivative  $f'(0)$  does not exist.

38. Left-hand derivative: When  $h < 0$ ,  $1+h < 1 \Rightarrow f(1+h) = 2 \Rightarrow \lim_{h \rightarrow 0^-} \frac{f(1+h) - f(1)}{h} = \lim_{h \rightarrow 0^-} \frac{2-2}{h}$

$$= \lim_{h \rightarrow 0^-} 0 = 0;$$

Right-hand derivative: When  $h > 0$ ,  $1+h > 1 \Rightarrow f(1+h) = 2(1+h) = 2+2h \Rightarrow \lim_{h \rightarrow 0^+} \frac{f(1+h) - f(1)}{h}$

$$= \lim_{h \rightarrow 0^+} \frac{(2+2h)-2}{h} = \lim_{h \rightarrow 0^+} \frac{2h}{h} = \lim_{h \rightarrow 0^+} 2 = 2;$$

Then  $\lim_{h \rightarrow 0^-} \frac{f(1+h) - f(1)}{h} \neq \lim_{h \rightarrow 0^+} \frac{f(1+h) - f(1)}{h} \Rightarrow$  the derivative  $f'(1)$  does not exist.

39. Left-hand derivative: When  $h < 0$ ,  $1+h < 1 \Rightarrow f(1+h) = \sqrt{1+h} \Rightarrow \lim_{h \rightarrow 0^-} \frac{f(1+h) - f(1)}{h}$

$$= \lim_{h \rightarrow 0^-} \frac{\sqrt{1+h}-1}{h} = \lim_{h \rightarrow 0^-} \frac{(\sqrt{1+h}-1)}{h} \cdot \frac{(\sqrt{1+h}+1)}{(\sqrt{1+h}+1)} = \lim_{h \rightarrow 0^-} \frac{(1+h)-1}{h(\sqrt{1+h}+1)} = \lim_{h \rightarrow 0^-} \frac{1}{\sqrt{1+h}+1} = \frac{1}{2};$$

Right-hand derivative: When  $h > 0$ ,  $1+h > 1 \Rightarrow f(1+h) = 2(1+h) - 1 = 2h+1 \Rightarrow \lim_{h \rightarrow 0^+} \frac{f(1+h) - f(1)}{h}$

$$= \lim_{h \rightarrow 0^+} \frac{(2h+1)-1}{h} = \lim_{h \rightarrow 0^+} 2 = 2;$$

Then  $\lim_{h \rightarrow 0^-} \frac{f(1+h) - f(1)}{h} \neq \lim_{h \rightarrow 0^+} \frac{f(1+h) - f(1)}{h} \Rightarrow$  the derivative  $f'(1)$  does not exist.

40. Left-hand derivative:  $\lim_{h \rightarrow 0^-} \frac{f(1+h) - f(1)}{h} = \lim_{h \rightarrow 0^-} \frac{(1+h)-1}{h} = \lim_{h \rightarrow 0^-} 1 = 1;$

Right-hand derivative:  $\lim_{h \rightarrow 0^+} \frac{f(1+h) - f(1)}{h} = \lim_{h \rightarrow 0^+} \frac{(\frac{1}{1+h}-1)}{h} = \lim_{h \rightarrow 0^+} \frac{(\frac{1-(1+h)}{1+h})}{h}$

$$= \lim_{h \rightarrow 0^+} \frac{-h}{h(1+h)} = \lim_{h \rightarrow 0^+} \frac{-1}{1+h} = -1;$$

Then  $\lim_{h \rightarrow 0^-} \frac{f(1+h) - f(1)}{h} \neq \lim_{h \rightarrow 0^+} \frac{f(1+h) - f(1)}{h} \Rightarrow$  the derivative  $f'(1)$  does not exist.

41.  $f$  is not continuous at  $x = 0$  since  $\lim_{x \rightarrow 0} f(x) =$  does not exist and  $f(0) = -1$

42. Left-hand derivative:  $\lim_{h \rightarrow 0^-} \frac{g(h) - g(0)}{h} = \lim_{h \rightarrow 0^-} \frac{h^{1/3} - 0}{h} = \lim_{h \rightarrow 0^-} \frac{1}{h^{2/3}} = +\infty;$

Right-hand derivative:  $\lim_{h \rightarrow 0^+} \frac{g(h) - g(0)}{h} = \lim_{h \rightarrow 0^+} \frac{h^{2/3} - 0}{h} = \lim_{h \rightarrow 0^+} \frac{1}{h^{1/3}} = +\infty;$

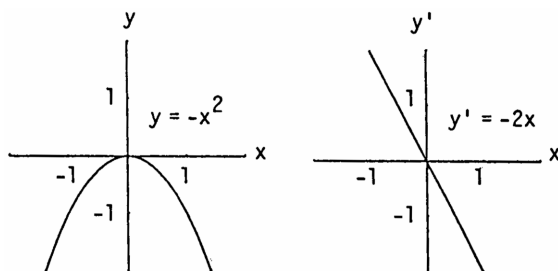
Then  $\lim_{h \rightarrow 0^-} \frac{g(h) - g(0)}{h} = \lim_{h \rightarrow 0^+} \frac{g(h) - g(0)}{h} = +\infty \Rightarrow$  the derivative  $g'(0)$  does not exist.

43. (a) The function is differentiable on its domain  $-3 \leq x \leq 2$  (it is smooth)  
 (b) none  
 (c) none
44. (a) The function is differentiable on its domain  $-2 \leq x \leq 3$  (it is smooth)  
 (b) none  
 (c) none
45. (a) The function is differentiable on  $-3 \leq x < 0$  and  $0 < x \leq 3$   
 (b) none  
 (c) The function is neither continuous nor differentiable at  $x = 0$  since  $\lim_{x \rightarrow 0^-} f(x) \neq \lim_{x \rightarrow 0^+} f(x)$
46. (a)  $f$  is differentiable on  $-2 \leq x < -1$ ,  $-1 < x < 0$ ,  $0 < x < 2$ , and  $2 < x \leq 3$   
 (b)  $f$  is continuous but not differentiable at  $x = -1$ :  $\lim_{x \rightarrow -1} f(x) = 0$  exists but there is a corner at  $x = -1$  since  

$$\lim_{h \rightarrow 0^-} \frac{f(-1+h) - f(-1)}{h} = -3 \text{ and } \lim_{h \rightarrow 0^+} \frac{f(-1+h) - f(-1)}{h} = 3 \Rightarrow f'(-1) \text{ does not exist}$$
  
 (c)  $f$  is neither continuous nor differentiable at  $x = 0$  and  $x = 2$ :  
 at  $x = 0$ ,  $\lim_{x \rightarrow 0^-} f(x) = 3$  but  $\lim_{x \rightarrow 0^+} f(x) = 0 \Rightarrow \lim_{x \rightarrow 0} f(x)$  does not exist;  
 at  $x = 2$ ,  $\lim_{x \rightarrow 2} f(x)$  exists but  $\lim_{x \rightarrow 2} f(x) \neq f(2)$
47. (a)  $f$  is differentiable on  $-1 \leq x < 0$  and  $0 < x \leq 2$   
 (b)  $f$  is continuous but not differentiable at  $x = 0$ :  $\lim_{x \rightarrow 0} f(x) = 0$  exists but there is a cusp at  $x = 0$ , so  

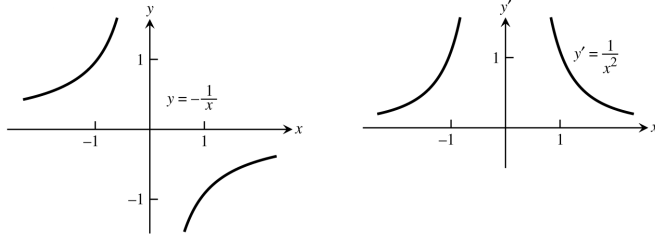
$$f'(0) = \lim_{h \rightarrow 0} \frac{f(0+h) - f(0)}{h} \text{ does not exist}$$
  
 (c) none
48. (a)  $f$  is differentiable on  $-3 \leq x < -2$ ,  $-2 < x < 2$ , and  $2 < x \leq 3$   
 (b)  $f$  is continuous but not differentiable at  $x = -2$  and  $x = 2$ : there are corners at those points  
 (c) none

49. (a)  $f'(x) = \lim_{h \rightarrow 0} \frac{f(x+h) - f(x)}{h} = \lim_{h \rightarrow 0} \frac{-(x+h)^2 - (-x^2)}{h} = \lim_{h \rightarrow 0} \frac{-x^2 - 2xh - h^2 + x^2}{h} = \lim_{h \rightarrow 0} (-2x - h) = -2x$   
 (b)



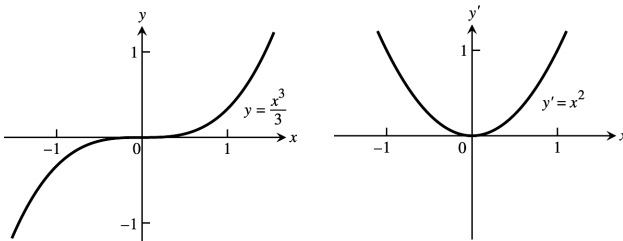
- (c)  $y' = -2x$  is positive for  $x < 0$ ,  $y'$  is zero when  $x = 0$ ,  $y'$  is negative when  $x > 0$   
 (d)  $y = -x^2$  is increasing for  $-\infty < x < 0$  and decreasing for  $0 < x < \infty$ ; the function is increasing on intervals where  $y' > 0$  and decreasing on intervals where  $y' < 0$
50. (a)  $f'(x) = \lim_{h \rightarrow 0} \frac{f(x+h) - f(x)}{h} = \lim_{h \rightarrow 0} \frac{\left(\frac{-1}{x+h} - \frac{-1}{x}\right)}{h} = \lim_{h \rightarrow 0} \frac{-x + (x+h)}{x(x+h)h} = \lim_{h \rightarrow 0} \frac{1}{x(x+h)} = \frac{1}{x^2}$

(b)

(c)  $y'$  is positive for all  $x \neq 0$ ,  $y'$  is never 0,  $y'$  is never negative(d)  $y = -\frac{1}{x}$  is increasing for  $-\infty < x < 0$  and  $0 < x < \infty$ 

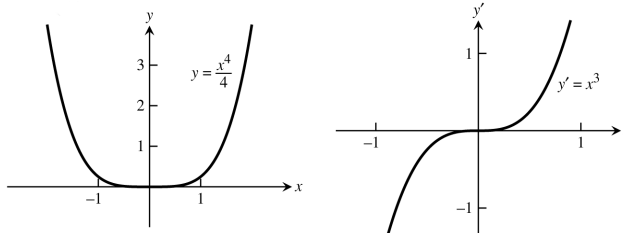
51. (a) Using the alternate formula for calculating derivatives:  $f'(x) = \lim_{z \rightarrow x} \frac{f(z) - f(x)}{z - x} = \lim_{z \rightarrow x} \frac{\left(\frac{z^3}{3} - \frac{x^3}{3}\right)}{z - x}$   
 $= \lim_{z \rightarrow x} \frac{z^3 - x^3}{3(z - x)} = \lim_{z \rightarrow x} \frac{(z - x)(z^2 + zx + x^2)}{3(z - x)} = \lim_{z \rightarrow x} \frac{z^2 + zx + x^2}{3} = x^2 \Rightarrow f'(x) = x^2$

(b)

(c)  $y'$  is positive for all  $x \neq 0$ , and  $y' = 0$  when  $x = 0$ ;  $y'$  is never negative(d)  $y = \frac{x^3}{3}$  is increasing for all  $x \neq 0$  (the graph is horizontal at  $x = 0$ ) because  $y$  is increasing where  $y' > 0$ ;  $y$  is never decreasing

52. (a) Using the alternate form for calculating derivatives:  $f'(x) = \lim_{z \rightarrow x} \frac{f(z) - f(x)}{z - x} = \lim_{z \rightarrow x} \frac{\left(\frac{z^4}{4} - \frac{x^4}{4}\right)}{z - x}$   
 $= \lim_{z \rightarrow x} \frac{z^4 - x^4}{4(z - x)} = \lim_{z \rightarrow x} \frac{(z - x)(z^3 + xz^2 + x^2z + x^3)}{4(z - x)} = \lim_{z \rightarrow x} \frac{z^3 + xz^2 + x^2z + x^3}{4} = x^3 \Rightarrow f'(x) = x^3$

(b)

(c)  $y'$  is positive for  $x > 0$ ,  $y'$  is zero for  $x = 0$ ,  $y'$  is negative for  $x < 0$ (d)  $y = \frac{x^4}{4}$  is increasing on  $0 < x < \infty$  and decreasing on  $-\infty < x < 0$ 

53.  $y' = \lim_{h \rightarrow 0} \frac{(2(x+h)^2 - 13(x+h) + 5) - (2x^2 - 13x + 5)}{h} = \lim_{h \rightarrow 0} \frac{2x^2 + 4xh + 2h^2 - 13x - 13h + 5 - 2x^2 + 13x - 5}{h}$   
 $= \lim_{h \rightarrow 0} \frac{4xh + 2h^2 - 13h}{h} = \lim_{h \rightarrow 0} (4x + 2h - 13) = 4x - 13$ , slope at  $x$ . The slope is  $-1$  when  $4x - 13 = -1$   
 $\Rightarrow 4x = 12 \Rightarrow x = 3 \Rightarrow y = 2 \cdot 3^2 - 13 \cdot 3 + 5 = -16$ . Thus the tangent line is  $y + 16 = (-1)(x - 3)$   
 $\Rightarrow y = -x - 13$  and the point of tangency is  $(3, -16)$ .

54. For the curve  $y = \sqrt{x}$ , we have  $y' = \lim_{h \rightarrow 0} \frac{(\sqrt{x+h} - \sqrt{x})}{h} \cdot \frac{(\sqrt{x+h} + \sqrt{x})}{(\sqrt{x+h} + \sqrt{x})} = \lim_{h \rightarrow 0} \frac{(x+h) - x}{(\sqrt{x+h} + \sqrt{x})h}$   
 $= \lim_{h \rightarrow 0} \frac{1}{\sqrt{x+h} + \sqrt{x}} = \frac{1}{2\sqrt{x}}$ . Suppose  $(a, \sqrt{a})$  is the point of tangency of such a line and  $(-1, 0)$  is the point on the line where it crosses the  $x$ -axis. Then the slope of the line is  $\frac{\sqrt{a} - 0}{a - (-1)} = \frac{\sqrt{a}}{a+1}$  which must also equal

$\frac{1}{2\sqrt{a}}$ ; using the derivative formula at  $x = a \Rightarrow \frac{\sqrt{a}}{a+1} = \frac{1}{2\sqrt{a}} \Rightarrow 2a = a + 1 \Rightarrow a = 1$ . Thus such a line does exist: its point of tangency is  $(1, 1)$ , its slope is  $\frac{1}{2\sqrt{a}} = \frac{1}{2}$ ; and an equation of the line is  $y - 1 = \frac{1}{2}(x - 1) \Rightarrow y = \frac{1}{2}x + \frac{1}{2}$ .

55. Yes; the derivative of  $-f$  is  $-f'$  so that  $f'(x_0)$  exists  $\Rightarrow -f'(x_0)$  exists as well.

56. Yes; the derivative of  $3g$  is  $3g'$  so that  $g'(7)$  exists  $\Rightarrow 3g'(7)$  exists as well.

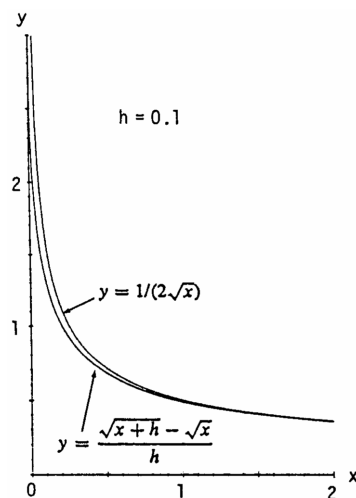
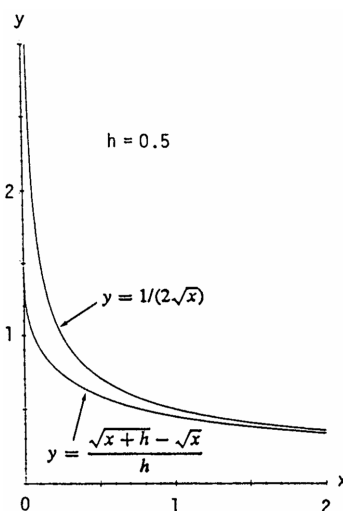
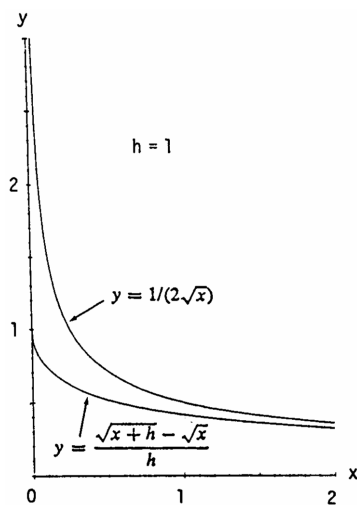
57. Yes,  $\lim_{t \rightarrow 0} \frac{g(t)}{h(t)}$  can exist but it need not equal zero. For example, let  $g(t) = mt$  and  $h(t) = t$ . Then  $g(0) = h(0) = 0$ , but  $\lim_{t \rightarrow 0} \frac{g(t)}{h(t)} = \lim_{t \rightarrow 0} \frac{mt}{t} = \lim_{t \rightarrow 0} m = m$ , which need not be zero.

58. (a) Suppose  $|f(x)| \leq x^2$  for  $-1 \leq x \leq 1$ . Then  $|f(0)| \leq 0^2 \Rightarrow f(0) = 0$ . Then  $f'(0) = \lim_{h \rightarrow 0} \frac{f(0+h) - f(0)}{h} = \lim_{h \rightarrow 0} \frac{f(h) - 0}{h} = \lim_{h \rightarrow 0} \frac{f(h)}{h}$ . For  $|h| \leq 1$ ,  $-h^2 \leq f(h) \leq h^2 \Rightarrow -h \leq \frac{f(h)}{h} \leq h \Rightarrow f'(0) = \lim_{h \rightarrow 0} \frac{f(h)}{h} = 0$  by the Sandwich Theorem for limits.

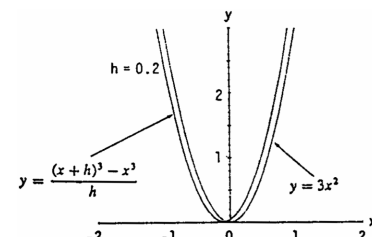
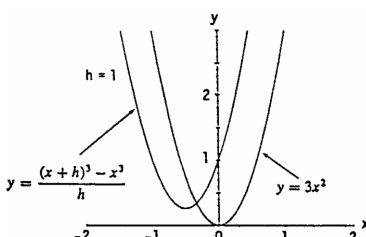
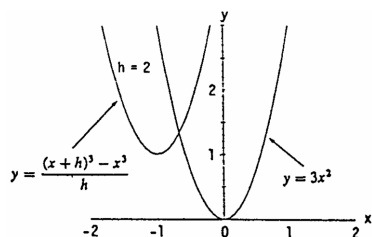
(b) Note that for  $x \neq 0$ ,  $|f(x)| = |x^2 \sin \frac{1}{x}| = |x^2| |\sin x| \leq |x^2| \cdot 1 = x^2$  (since  $-1 \leq \sin x \leq 1$ ). By part (a),  $f$  is differentiable at  $x = 0$  and  $f'(0) = 0$ .

59. The graphs are shown below for  $h = 1, 0.5, 0.1$ . The function  $y = \frac{1}{2\sqrt{x}}$  is the derivative of the function

$y = \sqrt{x}$  so that  $\frac{1}{2\sqrt{x}} = \lim_{h \rightarrow 0} \frac{\sqrt{x+h} - \sqrt{x}}{h}$ . The graphs reveal that  $y = \frac{\sqrt{x+h} - \sqrt{x}}{h}$  gets closer to  $y = \frac{1}{2\sqrt{x}}$  as  $h$  gets smaller and smaller.

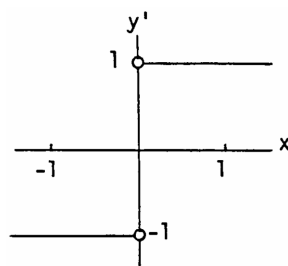


60. The graphs are shown below for  $h = 2, 1, 0.5$ . The function  $y = 3x^2$  is the derivative of the function  $y = x^3$  so that  $3x^2 = \lim_{h \rightarrow 0} \frac{(x+h)^3 - x^3}{h}$ . The graphs reveal that  $y = \frac{(x+h)^3 - x^3}{h}$  gets closer to  $y = 3x^2$  as  $h$  gets smaller and smaller.

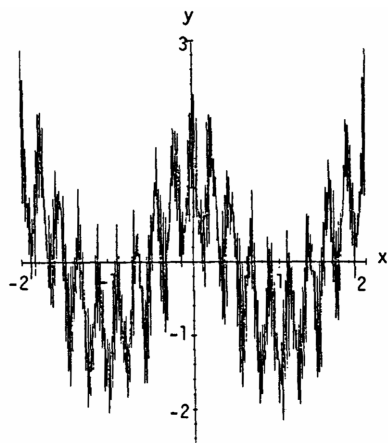


61. The graphs are the same. So we know that

for  $f(x) = |x|$ , we have  $f'(x) = \frac{|x|}{x}$ .



62. Weierstrass's nowhere differentiable continuous function.



$$g(x) = \cos(\pi x) + \left(\frac{2}{3}\right)^1 \cos(9\pi x) + \left(\frac{2}{3}\right)^2 \cos(9^2\pi x) + \left(\frac{2}{3}\right)^3 \cos(9^3\pi x) \\ + \cdots + \left(\frac{2}{3}\right)^7 \cos(9^7\pi x)$$

63-68. Example CAS commands:

Maple:

```
f := x -> x^3 + x^2 - x;
x0 := 1;
plot( f(x), x=x0-5..x0+2, color=black,
      title="Section 3.2, #63(a)" );
q := unapply( (f(x+h)-f(x))/h, (x,h) );
L := limit( q(x,h), h=0 );
m := eval( L, x=x0 );
tan_line := f(x0) + m*(x-x0);
plot( [f(x),tan_line], x=x0-2..x0+3, color=black,
      linestyle=[1,7], title="Section 3.2 #63(d)",
      legend=["y=f(x)", "Tangent line at x=1"] );
Xvals := sort( [ x0+2^(-k) $ k=0..5, x0-2^(-k) $ k=0..5 ] );
Yvals := map( f, Xvals );
evalf[4]( < convert(Xvals,Matrix) , convert(Yvals,Matrix) > );
plot( L, x=x0-5..x0+3, color=black, title="Section 3.2 #63(f)" );
```

Mathematica: (functions and x0 may vary) (see section 2.5 re. RealOnly):

```
<<Miscellaneous`RealOnly`
Clear[f, m, x, y, h]
x0= π /4;
f[x_]:=x^2 Cos[x]
Plot[f[x], {x, x0 - 3, x0 + 3}]
```



```

q[x_, h_] := (f[x + h] - f[x]) / h
m[x_] := Limit[q[x, h], h -> 0]
ytan := f[x0] + m[x0] (x - x0)
Plot[{f[x], ytan}, {x, x0 - 3, x0 + 3}]
m[x0 - 1] / N
m[x0 + 1] / N
Plot[{f[x], m[x]}, {x, x0 - 3, x0 + 3}]

```

### 3.3 DIFFERENTIATION RULES

1.  $y = -x^2 + 3 \Rightarrow \frac{dy}{dx} = \frac{d}{dx}(-x^2) + \frac{d}{dx}(3) = -2x + 0 = -2x \Rightarrow \frac{d^2y}{dx^2} = -2$
2.  $y = x^2 + x + 8 \Rightarrow \frac{dy}{dx} = 2x + 1 + 0 = 2x + 1 \Rightarrow \frac{d^2y}{dx^2} = 2$
3.  $s = 5t^3 - 3t^5 \Rightarrow \frac{ds}{dt} = \frac{d}{dt}(5t^3) - \frac{d}{dt}(3t^5) = 15t^2 - 15t^4 \Rightarrow \frac{d^2s}{dt^2} = \frac{d}{dt}(15t^2) - \frac{d}{dt}(15t^4) = 30t - 60t^3$
4.  $w = 3z^7 - 7z^3 + 21z^2 \Rightarrow \frac{dw}{dz} = 21z^6 - 21z^2 + 42z \Rightarrow \frac{d^2w}{dz^2} = 126z^5 - 42z + 42$
5.  $y = \frac{4}{3}x^3 - x \Rightarrow \frac{dy}{dx} = 4x^2 - 1 \Rightarrow \frac{d^2y}{dx^2} = 8x$
6.  $y = \frac{x^3}{3} + \frac{x^2}{2} + \frac{x}{4} \Rightarrow \frac{dy}{dx} = x^2 + x + \frac{1}{4} \Rightarrow \frac{d^2y}{dx^2} = 2x + 1 + 0 = 2x + 1$
7.  $w = 3z^{-2} - z^{-1} \Rightarrow \frac{dw}{dz} = -6z^{-3} + z^{-2} = \frac{-6}{z^3} + \frac{1}{z^2} \Rightarrow \frac{d^2w}{dz^2} = 18z^{-4} - 2z^{-3} = \frac{18}{z^4} - \frac{2}{z^3}$
8.  $s = -2t^{-1} + 4t^{-2} \Rightarrow \frac{ds}{dt} = 2t^{-2} - 8t^{-3} = \frac{2}{t^2} - \frac{8}{t^3} \Rightarrow \frac{d^2s}{dt^2} = -4t^{-3} + 24t^{-4} = \frac{-4}{t^3} + \frac{24}{t^4}$
9.  $y = 6x^2 - 10x - 5x^{-2} \Rightarrow \frac{dy}{dx} = 12x - 10 + 10x^{-3} = 12x - 10 + \frac{10}{x^3} \Rightarrow \frac{d^2y}{dx^2} = 12 - 0 - 30x^{-4} = 12 - \frac{30}{x^4}$
10.  $y = 4 - 2x - x^{-3} \Rightarrow \frac{dy}{dx} = -2 + 3x^{-4} = -2 + \frac{3}{x^4} \Rightarrow \frac{d^2y}{dx^2} = 0 - 12x^{-5} = \frac{-12}{x^5}$
11.  $r = \frac{1}{3}s^{-2} - \frac{5}{2}s^{-1} \Rightarrow \frac{dr}{ds} = -\frac{2}{3}s^{-3} + \frac{5}{2}s^{-2} = \frac{-2}{3s^3} + \frac{5}{2s^2} \Rightarrow \frac{d^2r}{ds^2} = 2s^{-4} - 5s^{-3} = \frac{2}{s^4} - \frac{5}{s^3}$
12.  $r = 12\theta^{-1} - 4\theta^{-3} + \theta^{-4} \Rightarrow \frac{dr}{d\theta} = -12\theta^{-2} + 12\theta^{-4} - 4\theta^{-5} = \frac{-12}{\theta^2} + \frac{12}{\theta^4} - \frac{4}{\theta^5} \Rightarrow \frac{d^2r}{d\theta^2} = 24\theta^{-3} - 48\theta^{-5} + 20\theta^{-6} = \frac{24}{\theta^3} - \frac{48}{\theta^5} + \frac{20}{\theta^6}$
13. (a)  $y = (3 - x^2)(x^3 - x + 1) \Rightarrow y' = (3 - x^2) \cdot \frac{d}{dx}(x^3 - x + 1) + (x^3 - x + 1) \cdot \frac{d}{dx}(3 - x^2)$   
 $= (3 - x^2)(3x^2 - 1) + (x^3 - x + 1)(-2x) = -5x^4 + 12x^2 - 2x - 3$   
 (b)  $y = -x^5 + 4x^3 - x^2 - 3x + 3 \Rightarrow y' = -5x^4 + 12x^2 - 2x - 3$
14. (a)  $y = (2x + 3)(5x^2 - 4x) \Rightarrow y' = (2x + 3)(10x - 4) + (5x^2 - 4x)(2) = 30x^2 + 14x - 12$   
 (b)  $y = (2x + 3)(5x^2 - 4x) = 10x^3 + 7x^2 - 12x \Rightarrow y' = 30x^2 + 14x - 12$
15. (a)  $y = (x^2 + 1)(x + 5 + \frac{1}{x}) \Rightarrow y' = (x^2 + 1) \cdot \frac{d}{dx}(x + 5 + \frac{1}{x}) + (x + 5 + \frac{1}{x}) \cdot \frac{d}{dx}(x^2 + 1)$   
 $= (x^2 + 1)(1 - x^{-2}) + (x + 5 + x^{-1})(2x) = (x^2 - 1 + 1 - x^{-2}) + (2x^2 + 10x + 2) = 3x^2 + 10x + 2 - \frac{1}{x^2}$   
 (b)  $y = x^3 + 5x^2 + 2x + 5 + \frac{1}{x} \Rightarrow y' = 3x^2 + 10x + 2 - \frac{1}{x^2}$

$$16. y = (1 + x^2)(x^{3/4} - x^{-3})$$

$$(a) y' = (1 + x^2) \cdot \left(\frac{3}{4}x^{-1/4} + 3x^{-4}\right) + (x^{3/4} - x^{-3})(2x) = \frac{3}{4x^{1/4}} + \frac{3}{x^4} + \frac{11}{4}x^{7/4} + \frac{1}{x^2}$$

$$(b) y = x^{3/4} - x^{-3} + x^{11/4} - x^{-1} \Rightarrow y' = \frac{3}{4x^{1/4}} + \frac{3}{x^4} + \frac{11}{4}x^{7/4} + \frac{1}{x^2}$$

$$17. y = \frac{2x+5}{3x-2}; \text{ use the quotient rule: } u = 2x + 5 \text{ and } v = 3x - 2 \Rightarrow u' = 2 \text{ and } v' = 3 \Rightarrow y' = \frac{vu' - uv'}{v^2} \\ = \frac{(3x-2)(2) - (2x+5)(3)}{(3x-2)^2} = \frac{6x-4-6x-15}{(3x-2)^2} = \frac{-19}{(3x-2)^2}$$

$$18. y = \frac{4-3x}{3x^2+x}; \text{ use the quotient rule: } u = 4 - 3x \text{ and } v = 3x^2 + x \Rightarrow u' = -3 \text{ and } v' = 6x + 1 \Rightarrow y' = \frac{vu' - uv'}{v^2} \\ = \frac{(3x^2+x)(-3) - (4-3x)(6x+1)}{(3x^2+x)^2} = \frac{-9x^2-3x+18x^2-21x-4}{(3x^2+x)^2} = \frac{9x^2-24x-4}{(3x^2+x)^2}$$

$$19. g(x) = \frac{x^2-4}{x+0.5}; \text{ use the quotient rule: } u = x^2 - 4 \text{ and } v = x + 0.5 \Rightarrow u' = 2x \text{ and } v' = 1 \Rightarrow g'(x) = \frac{vu' - uv'}{v^2} \\ = \frac{(x+0.5)(2x) - (x^2-4)(1)}{(x+0.5)^2} = \frac{2x^2+x-x^2+4}{(x+0.5)^2} = \frac{x^2+x+4}{(x+0.5)^2}$$

$$20. f(t) = \frac{t^2-1}{t^2+t-2} = \frac{(t-1)(t+1)}{(t+2)(t-1)} = \frac{t+1}{t+2}, t \neq 1 \Rightarrow f'(t) = \frac{(t+2)(1) - (t+1)(1)}{(t+2)^2} = \frac{t+2-t-1}{(t+2)^2} = \frac{1}{(t+2)^2}$$

$$21. v = (1-t)(1+t^2)^{-1} = \frac{1-t}{1+t^2} \Rightarrow \frac{dv}{dt} = \frac{(1+t^2)(-1) - (1-t)(2t)}{(1+t^2)^2} = \frac{-1-t^2-2t+2t^2}{(1+t^2)^2} = \frac{t^2-2t-1}{(1+t^2)^2}$$

$$22. w = \frac{x+5}{2x-7} \Rightarrow w' = \frac{(2x-7)(1) - (x+5)(2)}{(2x-7)^2} = \frac{2x-7-2x-10}{(2x-7)^2} = \frac{-17}{(2x-7)^2}$$

$$23. f(s) = \frac{\sqrt{s}-1}{\sqrt{s}+1} \Rightarrow f'(s) = \frac{(\sqrt{s}+1)\left(\frac{1}{2\sqrt{s}}\right) - (\sqrt{s}-1)\left(\frac{1}{2\sqrt{s}}\right)}{(\sqrt{s}+1)^2} = \frac{(\sqrt{s}+1) - (\sqrt{s}-1)}{2\sqrt{s}(\sqrt{s}+1)^2} = \frac{1}{\sqrt{s}(\sqrt{s}+1)^2}$$

NOTE:  $\frac{d}{ds}(\sqrt{s}) = \frac{1}{2\sqrt{s}}$  from Example 2 in Section 3.2

$$24. u = \frac{5x+1}{2\sqrt{x}} \Rightarrow \frac{du}{dx} = \frac{(2\sqrt{x})(5) - (5x+1)\left(\frac{1}{\sqrt{x}}\right)}{4x} = \frac{5x-1}{4x^{3/2}}$$

$$25. v = \frac{1+x-4\sqrt{x}}{x} \Rightarrow v' = \frac{x\left(1-\frac{2}{\sqrt{x}}\right) - (1+x-4\sqrt{x})}{x^2} = \frac{2\sqrt{x}-1}{x^2}$$

$$26. r = 2\left(\frac{1}{\sqrt{\theta}} + \sqrt{\theta}\right) \Rightarrow r' = 2\left(\frac{\sqrt{\theta}(0)-1\left(\frac{1}{2\sqrt{\theta}}\right)}{\theta} + \frac{1}{2\sqrt{\theta}}\right) = -\frac{1}{\theta^{3/2}} + \frac{1}{\theta^{1/2}}$$

$$27. y = \frac{1}{(x^2-1)(x^2+x+1)}; \text{ use the quotient rule: } u = 1 \text{ and } v = (x^2-1)(x^2+x+1) \Rightarrow u' = 0 \text{ and } \\ v' = (x^2-1)(2x+1) + (x^2+x+1)(2x) = 2x^3+x^2-2x-1+2x^3+2x^2+2x = 4x^3+3x^2-1 \\ \Rightarrow \frac{dy}{dx} = \frac{vu' - uv'}{v^2} = \frac{0-1(4x^3+3x^2-1)}{(x^2-1)^2(x^2+x+1)^2} = \frac{-4x^3-3x^2+1}{(x^2-1)^2(x^2+x+1)^2}$$

$$28. y = \frac{(x+1)(x+2)}{(x-1)(x-2)} = \frac{x^2+3x+2}{x^2-3x+2} \Rightarrow y' = \frac{(x^2-3x+2)(2x+3) - (x^2+3x+2)(2x-3)}{(x-1)^2(x-2)^2} = \frac{-6x^2+12}{(x-1)^2(x-2)^2} = \frac{-6(x^2-2)}{(x-1)^2(x-2)^2}$$

$$29. y = \frac{1}{2}x^4 - \frac{3}{2}x^2 - x \Rightarrow y' = 2x^3 - 3x - 1 \Rightarrow y'' = 6x^2 - 3 \Rightarrow y''' = 12x \Rightarrow y^{(4)} = 12 \Rightarrow y^{(n)} = 0 \text{ for all } n \geq 5$$

$$30. y = \frac{1}{120}x^5 \Rightarrow y' = \frac{1}{24}x^4 \Rightarrow y'' = \frac{1}{6}x^3 \Rightarrow y''' = \frac{1}{2}x^2 \Rightarrow y^{(4)} = x \Rightarrow y^{(5)} = 1 \Rightarrow y^{(n)} = 0 \text{ for all } n \geq 6$$

$$31. y = (x-1)(x^2+3x-5) = x^3+2x^2-8x+5 \Rightarrow y' = 3x^2+4x-8 \Rightarrow y'' = 6x+4 \Rightarrow y''' = 6 \Rightarrow y^{(n)} = 0 \text{ for all } n \geq 4$$

$$32. y = (4x^3 + 3x)(2 - x) = -4x^4 + 8x^3 - 3x^2 + 6x \Rightarrow y' = -16x^3 + 24x^2 - 6x + 6 \Rightarrow y'' = -48x^2 + 48x - 6 \\ \Rightarrow y''' = -96x + 48 \Rightarrow y^{(4)} = -96 \Rightarrow y^{(n)} = 0 \text{ for all } n \geq 5$$

$$33. y = \frac{x^3+7}{x} = x^2 + 7x^{-1} \Rightarrow \frac{dy}{dx} = 2x - 7x^{-2} = 2x - \frac{7}{x^2} \Rightarrow \frac{d^2y}{dx^2} = 2 + 14x^{-3} = 2 + \frac{14}{x^3}$$

$$34. s = \frac{t^2+5t-1}{t^2} = 1 + \frac{5}{t} - \frac{1}{t^2} = 1 + 5t^{-1} - t^{-2} \Rightarrow \frac{ds}{dt} = 0 - 5t^{-2} + 2t^{-3} = -5t^{-2} + 2t^{-3} = \frac{-5}{t^2} + \frac{2}{t^3} \\ \Rightarrow \frac{d^2s}{dt^2} = 10t^{-3} - 6t^{-4} = \frac{10}{t^3} - \frac{6}{t^4}$$

$$35. r = \frac{(\theta-1)(\theta^2+\theta+1)}{\theta^3} = \frac{\theta^3-1}{\theta^3} = 1 - \frac{1}{\theta^3} = 1 - \theta^{-3} \Rightarrow \frac{dr}{d\theta} = 0 + 3\theta^{-4} = 3\theta^{-4} = \frac{3}{\theta^4} \Rightarrow \frac{d^2r}{d\theta^2} = -12\theta^{-5} = \frac{-12}{\theta^5}$$

$$36. u = \frac{(x^2+x)(x^2-x+1)}{x^4} = \frac{x(x+1)(x^2-x+1)}{x^4} = \frac{x(x^3+1)}{x^4} = \frac{x^4+x}{x^4} = 1 + \frac{x}{x^4} = 1 + x^{-3} \\ \Rightarrow \frac{du}{dx} = 0 - 3x^{-4} = -3x^{-4} = \frac{-3}{x^4} \Rightarrow \frac{d^2u}{dx^2} = 12x^{-5} = \frac{12}{x^5}$$

$$37. w = \left(\frac{1+3z}{3z}\right)(3-z) = \left(\frac{1}{3}z^{-1} + 1\right)(3-z) = z^{-1} - \frac{1}{3} + 3 - z = z^{-1} + \frac{8}{3} - z \Rightarrow \frac{dw}{dz} = -z^{-2} + 0 - 1 = -z^{-2} - 1 \\ = \frac{-1}{z^2} - 1 \Rightarrow \frac{d^2w}{dz^2} = 2z^{-3} - 0 = 2z^{-3} = \frac{2}{z^3}$$

$$38. w = (z+1)(z-1)(z^2+1) = (z^2-1)(z^2+1) = z^4-1 \Rightarrow \frac{dw}{dz} = 4z^3 - 0 = 4z^3 \Rightarrow \frac{d^2w}{dz^2} = 12z^2$$

$$39. p = \left(\frac{q^2+3}{12q}\right)\left(\frac{q^4-1}{q^3}\right) = \frac{q^6-q^2+3q^4-3}{12q^4} = \frac{1}{12}q^2 - \frac{1}{12}q^{-2} + \frac{1}{4} - \frac{1}{4}q^{-4} \Rightarrow \frac{dp}{dq} = \frac{1}{6}q + \frac{1}{6}q^{-3} + q^{-5} = \frac{1}{6}q + \frac{1}{6q^3} + \frac{1}{q^5} \\ \Rightarrow \frac{d^2p}{dq^2} = \frac{1}{6} - \frac{1}{2}q^{-4} - 5q^{-6} = \frac{1}{6} - \frac{1}{2q^4} - \frac{5}{q^6}$$

$$40. p = \frac{q^2+3}{(q-1)^3+(q+1)^3} = \frac{q^2+3}{(q^3-3q^2+3q-1)+(q^3+3q^2+3q+1)} = \frac{q^2+3}{2q^3+6q} = \frac{q^2+3}{2q(q^2+3)} = \frac{1}{2q} = \frac{1}{2}q^{-1} \\ \Rightarrow \frac{dp}{dq} = -\frac{1}{2}q^{-2} = -\frac{1}{2q^2} \Rightarrow \frac{d^2p}{dq^2} = q^{-3} = \frac{1}{q^3}$$

$$41. u(0) = 5, u'(0) = -3, v(0) = -1, v'(0) = 2$$

$$(a) \frac{d}{dx}(uv) = uv' + vu' \Rightarrow \left.\frac{d}{dx}(uv)\right|_{x=0} = u(0)v'(0) + v(0)u'(0) = 5 \cdot 2 + (-1)(-3) = 13$$

$$(b) \frac{d}{dx}\left(\frac{u}{v}\right) = \frac{vu' - uv'}{v^2} \Rightarrow \left.\frac{d}{dx}\left(\frac{u}{v}\right)\right|_{x=0} = \frac{v(0)u'(0) - u(0)v'(0)}{(v(0))^2} = \frac{(-1)(-3) - (5)(2)}{(-1)^2} = -7$$

$$(c) \frac{d}{dx}\left(\frac{v}{u}\right) = \frac{uv' - vu'}{u^2} \Rightarrow \left.\frac{d}{dx}\left(\frac{v}{u}\right)\right|_{x=0} = \frac{u(0)v'(0) - v(0)u'(0)}{(u(0))^2} = \frac{(5)(2) - (-1)(-3)}{(5)^2} = \frac{7}{25}$$

$$(d) \frac{d}{dx}(7v - 2u) = 7v' - 2u' \Rightarrow \left.\frac{d}{dx}(7v - 2u)\right|_{x=0} = 7v'(0) - 2u'(0) = 7 \cdot 2 - 2(-3) = 20$$

$$42. u(1) = 2, u'(1) = 0, v(1) = 5, v'(1) = -1$$

$$(a) \left.\frac{d}{dx}(uv)\right|_{x=1} = u(1)v'(1) + v(1)u'(1) = 2 \cdot (-1) + 5 \cdot 0 = -2$$

$$(b) \left.\frac{d}{dx}\left(\frac{u}{v}\right)\right|_{x=1} = \frac{v(1)u'(1) - u(1)v'(1)}{(v(1))^2} = \frac{5 \cdot 0 - 2 \cdot (-1)}{(5)^2} = \frac{2}{25}$$

$$(c) \left.\frac{d}{dx}\left(\frac{v}{u}\right)\right|_{x=1} = \frac{u(1)v'(1) - v(1)u'(1)}{(u(1))^2} = \frac{2 \cdot (-1) - 5 \cdot 0}{(2)^2} = -\frac{1}{2}$$

$$(d) \left.\frac{d}{dx}(7v - 2u)\right|_{x=1} = 7v'(1) - 2u'(1) = 7 \cdot (-1) - 2 \cdot 0 = -7$$

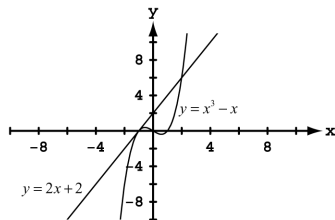
$$43. y = x^3 - 4x + 1. \text{ Note that } (2, 1) \text{ is on the curve: } 1 = 2^3 - 4(2) + 1$$

(a) Slope of the tangent at  $(x, y)$  is  $y' = 3x^2 - 4 \Rightarrow$  slope of the tangent at  $(2, 1)$  is  $y'(2) = 3(2)^2 - 4 = 8$ . Thus the slope of the line perpendicular to the tangent at  $(2, 1)$  is  $-\frac{1}{8} \Rightarrow$  the equation of the line perpendicular to the tangent line at  $(2, 1)$  is  $y - 1 = -\frac{1}{8}(x - 2)$  or  $y = -\frac{x}{8} + \frac{5}{4}$ .

(b) The slope of the curve at  $x$  is  $m = 3x^2 - 4$  and the smallest value for  $m$  is  $-4$  when  $x = 0$  and  $y = 1$ .

- (c) We want the slope of the curve to be 8  $\Rightarrow y' = 8 \Rightarrow 3x^2 - 4 = 8 \Rightarrow 3x^2 = 12 \Rightarrow x^2 = 4 \Rightarrow x = \pm 2$ . When  $x = 2$ ,  $y = 1$  and the tangent line has equation  $y - 1 = 8(x - 2)$  or  $y = 8x - 15$ ; when  $x = -2$ ,  $y = (-2)^3 - 4(-2) + 1 = 1$ , and the tangent line has equation  $y - 1 = 8(x + 2)$  or  $y = 8x + 17$ .
44. (a)  $y = x^3 - 3x - 2 \Rightarrow y' = 3x^2 - 3$ . For the tangent to be horizontal, we need  $m = y' = 0 \Rightarrow 0 = 3x^2 - 3 \Rightarrow 3x^2 = 3 \Rightarrow x = \pm 1$ . When  $x = -1$ ,  $y = 0 \Rightarrow$  the tangent line has equation  $y = 0$ . The line perpendicular to this line at  $(-1, 0)$  is  $x = -1$ . When  $x = 1$ ,  $y = -4 \Rightarrow$  the tangent line has equation  $y = -4$ . The line perpendicular to this line at  $(1, -4)$  is  $x = 1$ .
- (b) The smallest value of  $y'$  is  $-3$ , and this occurs when  $x = 0$  and  $y = -2$ . The tangent to the curve at  $(0, -2)$  has slope  $-3 \Rightarrow$  the line perpendicular to the tangent at  $(0, -2)$  has slope  $\frac{1}{3} \Rightarrow y + 2 = \frac{1}{3}(x - 0)$  or  $y = \frac{1}{3}x - 2$  is an equation of the perpendicular line.
45.  $y = \frac{4x}{x^2 + 1} \Rightarrow \frac{dy}{dx} = \frac{(x^2 + 1)(4) - (4x)(2x)}{(x^2 + 1)^2} = \frac{4x^2 + 4 - 8x^2}{(x^2 + 1)^2} = \frac{4(-x^2 + 1)}{(x^2 + 1)^2}$ . When  $x = 0$ ,  $y = 0$  and  $y' = \frac{4(0+1)}{1} = 4$ , so the tangent to the curve at  $(0, 0)$  is the line  $y = 4x$ . When  $x = 1$ ,  $y = 2 \Rightarrow y' = 0$ , so the tangent to the curve at  $(1, 2)$  is the line  $y = 2$ .
46.  $y = \frac{8}{x^2 + 4} \Rightarrow y' = \frac{(x^2 + 4)(0) - 8(2x)}{(x^2 + 4)^2} = \frac{-16x}{(x^2 + 4)^2}$ . When  $x = 2$ ,  $y = 1$  and  $y' = \frac{-16(2)}{(2^2 + 4)^2} = -\frac{1}{2}$ , so the tangent line to the curve at  $(2, 1)$  has the equation  $y - 1 = -\frac{1}{2}(x - 2)$ , or  $y = -\frac{x}{2} + 2$ .
47.  $y = ax^2 + bx + c$  passes through  $(0, 0) \Rightarrow 0 = a(0) + b(0) + c \Rightarrow c = 0$ ;  $y = ax^2 + bx$  passes through  $(1, 2) \Rightarrow 2 = a + b$ ;  $y' = 2ax + b$  and since the curve is tangent to  $y = x$  at the origin, its slope is 1 at  $x = 0 \Rightarrow y' = 1$  when  $x = 0 \Rightarrow 1 = 2a(0) + b \Rightarrow b = 1$ . Then  $a + b = 2 \Rightarrow a = 1$ . In summary  $a = b = 1$  and  $c = 0$  so the curve is  $y = x^2 + x$ .
48.  $y = cx - x^2$  passes through  $(1, 0) \Rightarrow 0 = c(1) - 1 \Rightarrow c = 1 \Rightarrow$  the curve is  $y = x - x^2$ . For this curve,  $y' = 1 - 2x$  and  $x = 1 \Rightarrow y' = -1$ . Since  $y = x - x^2$  and  $y = x^2 + ax + b$  have common tangents at  $x = 0$ ,  $y = x^2 + ax + b$  must also have slope  $-1$  at  $x = 1$ . Thus  $y' = 2x + a \Rightarrow -1 = 2 \cdot 1 + a \Rightarrow a = -3 \Rightarrow y = x^2 - 3x + b$ . Since this last curve passes through  $(1, 0)$ , we have  $0 = 1 - 3 + b \Rightarrow b = 2$ . In summary,  $a = -3$ ,  $b = 2$  and  $c = 1$  so the curves are  $y = x^2 - 3x + 2$  and  $y = x - x^2$ .
49.  $y = 8x + 5 \Rightarrow m = 8$ ;  $f(x) = 3x^2 - 4x \Rightarrow f'(x) = 6x - 4$ ;  $6x - 4 = 8 \Rightarrow x = 2 \Rightarrow f(2) = 3(2)^2 - 4(2) = 4 \Rightarrow (2, 4)$
50.  $8x - 2y = 1 \Rightarrow y = 4x - \frac{1}{2} \Rightarrow m = 4$ ;  $g(x) = \frac{1}{3}x^3 - \frac{3}{2}x^2 + 1 \Rightarrow g'(x) = x^2 - 3x$ ;  $x^2 - 3x = 4 \Rightarrow x = 4$  or  $x = -1 \Rightarrow g(4) = \frac{1}{3}(4)^3 - \frac{3}{2}(4)^2 + 1 = -\frac{5}{3}$ ,  $g(-1) = \frac{1}{3}(-1)^3 - \frac{3}{2}(-1)^2 + 1 = -\frac{5}{6} \Rightarrow (4, -\frac{5}{3})$  or  $(-1, -\frac{5}{6})$
51.  $y = 2x + 3 \Rightarrow m = 2 \Rightarrow m_{\perp} = -\frac{1}{2}$ ;  $y = \frac{x}{x-2} \Rightarrow y' = \frac{(x-2)(1) - x(1)}{(x-2)^2} = \frac{-2}{(x-2)^2}$ ;  $\frac{-2}{(x-2)^2} = -\frac{1}{2} \Rightarrow 4 = (x-2)^2 \Rightarrow \pm 2 = x - 2 \Rightarrow x = 4$  or  $x = 0 \Rightarrow$  if  $x = 4$ ,  $y = \frac{4}{4-2} = 2$ , and if  $x = 0$ ,  $y = \frac{0}{0-2} = 0 \Rightarrow (4, 2)$  or  $(0, 0)$ .
52.  $m = \frac{y-8}{x-3}$ ;  $f(x) = x^2 \Rightarrow f'(x) = 2x$ ;  $m = f'(x) \Rightarrow \frac{y-8}{x-3} = 2x \Rightarrow \frac{x^2-8}{x-3} = 2x \Rightarrow x^2 - 8 = 2x^2 - 6x \Rightarrow x^2 - 6x + 8 = 0 \Rightarrow x = 4$  or  $x = 2 \Rightarrow f(4) = 4^2 = 16$ ,  $f(2) = 2^2 = 4 \Rightarrow (4, 16)$  or  $(2, 4)$ .
53. (a)  $y = x^3 - x \Rightarrow y' = 3x^2 - 1$ . When  $x = -1$ ,  $y = 0$  and  $y' = 2 \Rightarrow$  the tangent line to the curve at  $(-1, 0)$  is  $y = 2(x + 1)$  or  $y = 2x + 2$ .

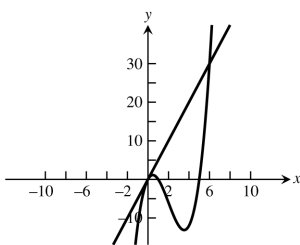
(b)



$$(c) \left. \begin{array}{l} y = x^3 - x \\ y = 2x + 2 \end{array} \right\} \Rightarrow x^3 - x = 2x + 2 \Rightarrow x^3 - 3x - 2 = (x - 2)(x + 1)^2 = 0 \Rightarrow x = 2 \text{ or } x = -1. \text{ Since } y = 2(2) + 2 = 6; \text{ the other intersection point is } (2, 6)$$

$$54. (a) y = x^3 - 6x^2 + 5x \Rightarrow y' = 3x^2 - 12x + 5. \text{ When } x = 0, y = 0 \text{ and } y' = 5 \Rightarrow \text{the tangent line to the curve at } (0, 0) \text{ is } y = 5x.$$

(b)



$$(c) \left. \begin{array}{l} y = x^3 - 6x^2 + 5x \\ y = 5x \end{array} \right\} \Rightarrow x^3 - 6x^2 + 5x = 5x \Rightarrow x^3 - 6x^2 = 0 \Rightarrow x^2(x - 6) = 0 \Rightarrow x = 0 \text{ or } x = 6. \text{ Since } y = 5(6) = 30, \text{ the other intersection point is } (6, 30).$$

$$55. \lim_{x \rightarrow 1} \frac{x^{50} - 1}{x - 1} = 50x^{49} \Big|_{x=1} = 50(1)^{49} = 50$$

$$56. \lim_{x \rightarrow -1} \frac{x^{2/9} - 1}{x + 1} = \frac{2}{9}x^{-7/9} \Big|_{x=-1} = \frac{2}{9(-1)^{7/9}} = -\frac{2}{9}$$

$$57. g'(x) = \begin{cases} 2x - 3 & x > 0 \\ a & x < 0 \end{cases}, \text{ since } g \text{ is differentiable at } x = 0 \Rightarrow \lim_{x \rightarrow 0^+} (2x - 3) = -3 \text{ and } \lim_{x \rightarrow 0^-} a = a \Rightarrow a = -3$$

$$58. f'(x) = \begin{cases} a & x > -1 \\ 2bx & x < -1 \end{cases}, \text{ since } f \text{ is differentiable at } x = -1 \Rightarrow \lim_{x \rightarrow -1^+} a = a \text{ and } \lim_{x \rightarrow -1^-} (2bx) = -2b \Rightarrow a = -2b, \text{ and} \\ \text{since } f \text{ is continuous at } x = -1 \Rightarrow \lim_{x \rightarrow -1^+} (ax + b) = -a + b \text{ and } \lim_{x \rightarrow -1^-} (bx^2 - 3) = b - 3 \Rightarrow -a + b = b - 3 \\ \Rightarrow a = 3 \Rightarrow 3 = -2b \Rightarrow b = -\frac{3}{2}.$$

$$59. P(x) = a_n x^n + a_{n-1} x^{n-1} + \cdots + a_2 x^2 + a_1 x + a_0 \Rightarrow P'(x) = na_n x^{n-1} + (n-1)a_{n-1} x^{n-2} + \cdots + 2a_2 x + a_1$$

$$60. R = M^2 \left( \frac{C}{2} - \frac{M}{3} \right) = \frac{C}{2} M^2 - \frac{1}{3} M^3, \text{ where } C \text{ is a constant} \Rightarrow \frac{dR}{dM} = CM - M^2$$

$$61. \text{ Let } c \text{ be a constant} \Rightarrow \frac{dc}{dx} = 0 \Rightarrow \frac{d}{dx} (u \cdot c) = u \cdot \frac{dc}{dx} + c \cdot \frac{du}{dx} = u \cdot 0 + c \cdot \frac{du}{dx} = c \frac{du}{dx}. \text{ Thus when one of the} \\ \text{functions is a constant, the Product Rule is just the Constant Multiple Rule} \Rightarrow \text{the Constant Multiple Rule is} \\ \text{a special case of the Product Rule.}$$

$$62. (a) \text{ We use the Quotient rule to derive the Reciprocal Rule (with } u = 1): \frac{d}{dx} \left( \frac{1}{v} \right) = \frac{v \cdot 0 - 1 \cdot \frac{dv}{dx}}{v^2} = \frac{-1 \cdot \frac{dv}{dx}}{v^2} = -\frac{1}{v^2} \cdot \frac{dv}{dx}.$$

(b) Now, using the Reciprocal Rule and the Product Rule, we'll derive the Quotient Rule:  $\frac{d}{dx} \left( \frac{u}{v} \right) = \frac{d}{dx} \left( u \cdot \frac{1}{v} \right)$   
 $= u \cdot \frac{d}{dx} \left( \frac{1}{v} \right) + \frac{1}{v} \cdot \frac{du}{dx}$  (Product Rule)  $= u \cdot \left( \frac{-1}{v^2} \right) \frac{dv}{dx} + \frac{1}{v} \frac{du}{dx}$  (Reciprocal Rule)  $\Rightarrow \frac{d}{dx} \left( \frac{u}{v} \right) = \frac{-u \frac{dv}{dx} + v \frac{du}{dx}}{v^2}$   
 $= \frac{v \frac{du}{dx} - u \frac{dv}{dx}}{v^2}$ , the Quotient Rule.

$$63. (a) \frac{d}{dx} (uvw) = \frac{d}{dx} ((uv) \cdot w) = (uv) \frac{dw}{dx} + w \cdot \frac{d}{dx} (uv) = uv \frac{dw}{dx} + w \left( u \frac{dv}{dx} + v \frac{du}{dx} \right) = uv \frac{dw}{dx} + wu \frac{dv}{dx} + wv \frac{du}{dx}$$

$$= uvw' + uv'w + u'vw$$

$$(b) \frac{d}{dx} (u_1 u_2 u_3 u_4) = \frac{d}{dx} ((u_1 u_2 u_3) u_4) = (u_1 u_2 u_3) \frac{du_4}{dx} + u_4 \frac{d}{dx} (u_1 u_2 u_3) \Rightarrow \frac{d}{dx} (u_1 u_2 u_3 u_4)$$

$$= u_1 u_2 u_3 \frac{du_4}{dx} + u_4 \left( u_1 u_2 \frac{du_3}{dx} + u_3 u_1 \frac{du_2}{dx} + u_3 u_2 \frac{du_1}{dx} \right) \quad (\text{using (a) above})$$

$$\Rightarrow \frac{d}{dx} (u_1 u_2 u_3 u_4) = u_1 u_2 u_3 \frac{du_4}{dx} + u_1 u_2 u_4 \frac{du_3}{dx} + u_1 u_3 u_4 \frac{du_2}{dx} + u_2 u_3 u_4 \frac{du_1}{dx}$$

$$= u_1 u_2 u_3 u_4' + u_1 u_2 u_3' u_4 + u_1 u_2' u_3 u_4 + u_1' u_2 u_3 u_4$$

(c) Generalizing (a) and (b) above,  $\frac{d}{dx} (u_1 \cdots u_n) = u_1 u_2 \cdots u_{n-1} u_n' + u_1 u_2 \cdots u_{n-2} u_{n-1}' u_n + \cdots + u_1' u_2 \cdots u_n$

$$64. \frac{d}{dx} (x^{-m}) = \frac{d}{dx} \left( \frac{1}{x^m} \right) = \frac{x^m \cdot 0 - 1(m \cdot x^{m-1})}{(x^m)^2} = \frac{-m \cdot x^{m-1}}{x^{2m}} = -m \cdot x^{m-1-2m} = -m \cdot x^{-m-1}$$

$$65. P = \frac{nRT}{V-nb} - \frac{an^2}{V^2}. \text{ We are holding } T \text{ constant, and } a, b, n, R \text{ are also constant so their derivatives are zero}$$

$$\Rightarrow \frac{dP}{dV} = \frac{(V-nb) \cdot 0 - (nRT)(1)}{(V-nb)^2} - \frac{V^2(0) - (an^2)(2V)}{(V^2)^2} = \frac{-nRT}{(V-nb)^2} + \frac{2an^2}{V^3}$$

$$66. A(q) = \frac{km}{q} + cm + \frac{hq}{2} = (km)q^{-1} + cm + \left(\frac{h}{2}\right)q \Rightarrow \frac{dA}{dq} = -(km)q^{-2} + \left(\frac{h}{2}\right) = -\frac{km}{q^2} + \frac{h}{2} \Rightarrow \frac{d^2A}{dq^2} = 2(km)q^{-3} = \frac{2km}{q^3}$$

### 3.4 THE DERIVATIVE AS A RATE OF CHANGE

$$1. s = t^2 - 3t + 2, 0 \leq t \leq 2$$

$$(a) \text{ displacement} = \Delta s = s(2) - s(0) = 0\text{ m} - 2\text{ m} = -2\text{ m}, v_{av} = \frac{\Delta s}{\Delta t} = \frac{-2}{2} = -1\text{ m/sec}$$

$$(b) v = \frac{ds}{dt} = 2t - 3 \Rightarrow |v(0)| = |-3| = 3\text{ m/sec and } |v(2)| = 1\text{ m/sec};$$

$$a = \frac{d^2s}{dt^2} = 2 \Rightarrow a(0) = 2\text{ m/sec}^2 \text{ and } a(2) = 2\text{ m/sec}^2$$

(c)  $v = 0 \Rightarrow 2t - 3 = 0 \Rightarrow t = \frac{3}{2}$ .  $v$  is negative in the interval  $0 < t < \frac{3}{2}$  and  $v$  is positive when  $\frac{3}{2} < t < 2 \Rightarrow$  the body changes direction at  $t = \frac{3}{2}$ .

$$2. s = 6t - t^2, 0 \leq t \leq 6$$

$$(a) \text{ displacement} = \Delta s = s(6) - s(0) = 0\text{ m}, v_{av} = \frac{\Delta s}{\Delta t} = \frac{0}{6} = 0\text{ m/sec}$$

$$(b) v = \frac{ds}{dt} = 6 - 2t \Rightarrow |v(0)| = |6| = 6\text{ m/sec and } |v(6)| = |-6| = 6\text{ m/sec};$$

$$a = \frac{d^2s}{dt^2} = -2 \Rightarrow a(0) = -2\text{ m/sec}^2 \text{ and } a(6) = -2\text{ m/sec}^2$$

(c)  $v = 0 \Rightarrow 6 - 2t = 0 \Rightarrow t = 3$ .  $v$  is positive in the interval  $0 < t < 3$  and  $v$  is negative when  $3 < t < 6 \Rightarrow$  the body changes direction at  $t = 3$ .

$$3. s = -t^3 + 3t^2 - 3t, 0 \leq t \leq 3$$

$$(a) \text{ displacement} = \Delta s = s(3) - s(0) = -9\text{ m}, v_{av} = \frac{\Delta s}{\Delta t} = \frac{-9}{3} = -3\text{ m/sec}$$

$$(b) v = \frac{ds}{dt} = -3t^2 + 6t - 3 \Rightarrow |v(0)| = |-3| = 3\text{ m/sec and } |v(3)| = |-12| = 12\text{ m/sec}; a = \frac{d^2s}{dt^2} = -6t + 6$$

$$\Rightarrow a(0) = 6\text{ m/sec}^2 \text{ and } a(3) = -12\text{ m/sec}^2$$

(c)  $v = 0 \Rightarrow -3t^2 + 6t - 3 = 0 \Rightarrow t^2 - 2t + 1 = 0 \Rightarrow (t-1)^2 = 0 \Rightarrow t = 1$ . For all other values of  $t$  in the interval the velocity  $v$  is negative (the graph of  $v = -3t^2 + 6t - 3$  is a parabola with vertex at  $t = 1$  which opens downward  $\Rightarrow$  the body never changes direction).

4.  $s = \frac{t^4}{4} - t^3 + t^2, 0 \leq t \leq 3$
- (a)  $\Delta s = s(3) - s(0) = \frac{9}{4} \text{ m}, v_{\text{av}} = \frac{\Delta s}{\Delta t} = \frac{\frac{9}{4}}{3} = \frac{3}{4} \text{ m/sec}$
- (b)  $v = t^3 - 3t^2 + 2t \Rightarrow |v(0)| = 0 \text{ m/sec}$  and  $|v(3)| = 6 \text{ m/sec}$ ;  $a = 3t^2 - 6t + 2 \Rightarrow a(0) = 2 \text{ m/sec}^2$  and  $a(3) = 11 \text{ m/sec}^2$
- (c)  $v = 0 \Rightarrow t^3 - 3t^2 + 2t = 0 \Rightarrow t(t-2)(t-1) = 0 \Rightarrow t = 0, 1, 2 \Rightarrow v = t(t-2)(t-1)$  is positive in the interval for  $0 < t < 1$  and  $v$  is negative for  $1 < t < 2$  and  $v$  is positive for  $2 < t < 3 \Rightarrow$  the body changes direction at  $t = 1$  and at  $t = 2$ .
5.  $s = \frac{25}{t^2} - \frac{5}{t}, 1 \leq t \leq 5$
- (a)  $\Delta s = s(5) - s(1) = -20 \text{ m}, v_{\text{av}} = \frac{-20}{4} = -5 \text{ m/sec}$
- (b)  $v = \frac{-50}{t^3} + \frac{5}{t^2} \Rightarrow |v(1)| = 45 \text{ m/sec}$  and  $|v(5)| = \frac{1}{5} \text{ m/sec}$ ;  $a = \frac{150}{t^4} - \frac{10}{t^3} \Rightarrow a(1) = 140 \text{ m/sec}^2$  and  $a(5) = \frac{4}{25} \text{ m/sec}^2$
- (c)  $v = 0 \Rightarrow \frac{-50+5t}{t^3} = 0 \Rightarrow -50 + 5t = 0 \Rightarrow t = 10 \Rightarrow$  the body does not change direction in the interval
6.  $s = \frac{25}{t+5}, -4 \leq t \leq 0$
- (a)  $\Delta s = s(0) - s(-4) = -20 \text{ m}, v_{\text{av}} = -\frac{20}{4} = -5 \text{ m/sec}$
- (b)  $v = \frac{-25}{(t+5)^2} \Rightarrow |v(-4)| = 25 \text{ m/sec}$  and  $|v(0)| = 1 \text{ m/sec}$ ;  $a = \frac{50}{(t+5)^3} \Rightarrow a(-4) = 50 \text{ m/sec}^2$  and  $a(0) = \frac{2}{5} \text{ m/sec}^2$
- (c)  $v = 0 \Rightarrow \frac{-25}{(t+5)^2} = 0 \Rightarrow v$  is never 0  $\Rightarrow$  the body never changes direction
7.  $s = t^3 - 6t^2 + 9t$  and let the positive direction be to the right on the  $s$ -axis.
- (a)  $v = 3t^2 - 12t + 9$  so that  $v = 0 \Rightarrow t^2 - 4t + 3 = (t-3)(t-1) = 0 \Rightarrow t = 1$  or  $3$ ;  $a = 6t - 12 \Rightarrow a(1) = -6 \text{ m/sec}^2$  and  $a(3) = 6 \text{ m/sec}^2$ . Thus the body is motionless but being accelerated left when  $t = 1$ , and motionless but being accelerated right when  $t = 3$ .
- (b)  $a = 0 \Rightarrow 6t - 12 = 0 \Rightarrow t = 2$  with speed  $|v(2)| = |12 - 24 + 9| = 3 \text{ m/sec}$
- (c) The body moves to the right or forward on  $0 \leq t < 1$ , and to the left or backward on  $1 < t < 2$ . The positions are  $s(0) = 0, s(1) = 4$  and  $s(2) = 2 \Rightarrow$  total distance  $= |s(1) - s(0)| + |s(2) - s(1)| = |4| + |-2| = 6 \text{ m}$ .
8.  $v = t^2 - 4t + 3 \Rightarrow a = 2t - 4$
- (a)  $v = 0 \Rightarrow t^2 - 4t + 3 = 0 \Rightarrow t = 1$  or  $3 \Rightarrow a(1) = -2 \text{ m/sec}^2$  and  $a(3) = 2 \text{ m/sec}^2$
- (b)  $v > 0 \Rightarrow (t-3)(t-1) > 0 \Rightarrow 0 \leq t < 1$  or  $t > 3$  and the body is moving forward;  $v < 0 \Rightarrow (t-3)(t-1) < 0 \Rightarrow 1 < t < 3$  and the body is moving backward
- (c) velocity increasing  $\Rightarrow a > 0 \Rightarrow 2t - 4 > 0 \Rightarrow t > 2$ ; velocity decreasing  $\Rightarrow a < 0 \Rightarrow 2t - 4 < 0 \Rightarrow 0 \leq t < 2$
9.  $s_m = 1.86t^2 \Rightarrow v_m = 3.72t$  and solving  $3.72t = 27.8 \Rightarrow t \approx 7.5 \text{ sec}$  on Mars;  $s_j = 11.44t^2 \Rightarrow v_j = 22.88t$  and solving  $22.88t = 27.8 \Rightarrow t \approx 1.2 \text{ sec}$  on Jupiter.
10. (a)  $v(t) = s'(t) = 24 - 1.6t \text{ m/sec}$ , and  $a(t) = v'(t) = s''(t) = -1.6 \text{ m/sec}^2$
- (b) Solve  $v(t) = 0 \Rightarrow 24 - 1.6t = 0 \Rightarrow t = 15 \text{ sec}$
- (c)  $s(15) = 24(15) - .8(15)^2 = 180 \text{ m}$
- (d) Solve  $s(t) = 90 \Rightarrow 24t - .8t^2 = 90 \Rightarrow t = \frac{30 \pm 15\sqrt{2}}{2} \approx 4.39 \text{ sec}$  going up and  $25.6 \text{ sec}$  going down
- (e) Twice the time it took to reach its highest point or  $30 \text{ sec}$
11.  $s = 15t - \frac{1}{2} g_s t^2 \Rightarrow v = 15 - g_s t$  so that  $v = 0 \Rightarrow 15 - g_s t = 0 \Rightarrow g_s = \frac{15}{t}$ . Therefore  $g_s = \frac{15}{20} = \frac{3}{4} = 0.75 \text{ m/sec}^2$

12. Solving  $s_m = 832t - 2.6t^2 = 0 \Rightarrow t(832 - 2.6t) = 0 \Rightarrow t = 0$  or  $320 \Rightarrow 320$  sec on the moon; solving  $s_e = 832t - 16t^2 = 0 \Rightarrow t(832 - 16t) = 0 \Rightarrow t = 0$  or  $52 \Rightarrow 52$  sec on the earth. Also,  $v_m = 832 - 5.2t = 0 \Rightarrow t = 160$  and  $s_m(160) = 66,560$  ft, the height it reaches above the moon's surface;  $v_e = 832 - 32t = 0 \Rightarrow t = 26$  and  $s_e(26) = 10,816$  ft, the height it reaches above the earth's surface.

13. (a)  $s = 179 - 16t^2 \Rightarrow v = -32t \Rightarrow \text{speed} = |v| = 32t$  ft/sec and  $a = -32$  ft/sec<sup>2</sup>

(b)  $s = 0 \Rightarrow 179 - 16t^2 = 0 \Rightarrow t = \sqrt{\frac{179}{16}} \approx 3.3$  sec

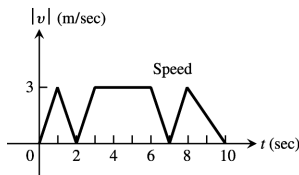
(c) When  $t = \sqrt{\frac{179}{16}}$ ,  $v = -32\sqrt{\frac{179}{16}} = -8\sqrt{179} \approx -107.0$  ft/sec

14. (a)  $\lim_{\theta \rightarrow \frac{\pi}{2}} v = \lim_{\theta \rightarrow \frac{\pi}{2}} 9.8(\sin \theta)t = 9.8t$  so we expect  $v = 9.8t$  m/sec in free fall

(b)  $a = \frac{dv}{dt} = 9.8$  m/sec<sup>2</sup>

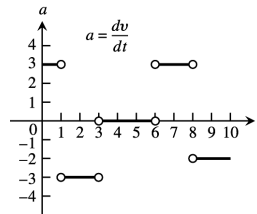
15. (a) at 2 and 7 seconds

(c)



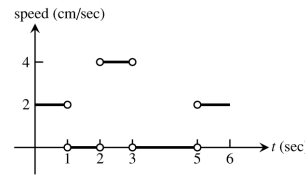
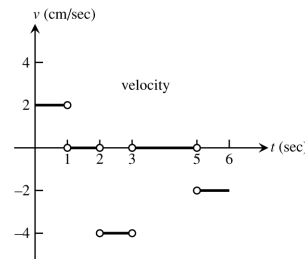
- (b) between 3 and 6 seconds:  $3 \leq t \leq 6$

(d)



16. (a) P is moving to the left when  $2 < t < 3$  or  $5 < t < 6$ ; P is moving to the right when  $0 < t < 1$ ; P is standing still when  $1 < t < 2$  or  $3 < t < 5$

(b)



17. (a) 190 ft/sec

- (b) 2 sec

- (c) at 8 sec, 0 ft/sec

- (d) 10.8 sec, 90 ft/sec

- (e) From  $t = 8$  until  $t = 10.8$  sec, a total of 2.8 sec

- (f) Greatest acceleration happens 2 sec after launch

- (g) From  $t = 2$  to  $t = 10.8$  sec; during this period,  $a = \frac{v(10.8) - v(2)}{10.8 - 2} \approx -32$  ft/sec<sup>2</sup>

18. (a) Forward:  $0 \leq t < 1$  and  $5 < t < 7$ ; Backward:  $1 < t < 5$ ; Speeds up:  $1 < t < 2$  and  $5 < t < 6$ ; Slows down:  $0 \leq t < 1$ ,  $3 < t < 5$ , and  $6 < t < 7$

- (b) Positive:  $3 < t < 6$ ; negative:  $0 \leq t < 2$  and  $6 < t < 7$ ; zero:  $2 < t < 3$  and  $7 < t < 9$

- (c)  $t = 0$  and  $2 \leq t \leq 3$

- (d)  $7 \leq t \leq 9$

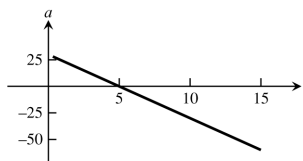
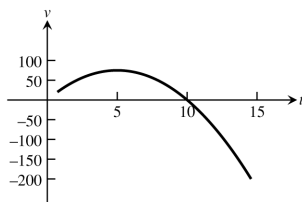
19.  $s = 490t^2 \Rightarrow v = 980t \Rightarrow a = 980$

- (a) Solving  $160 = 490t^2 \Rightarrow t = \frac{4}{7}$  sec. The average velocity was  $\frac{s(4/7) - s(0)}{4/7} = 280$  cm/sec.

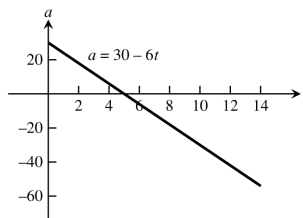
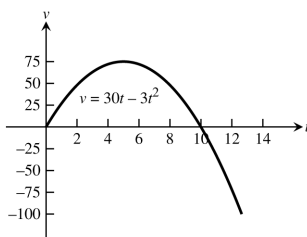


- (b) At the 160 cm mark the balls are falling at  $v(4/7) = 560$  cm/sec. The acceleration at the 160 cm mark was  $980$  cm/sec<sup>2</sup>.
- (c) The light was flashing at a rate of  $\frac{17}{47} = 29.75$  flashes per second.

20. (a)



(b)

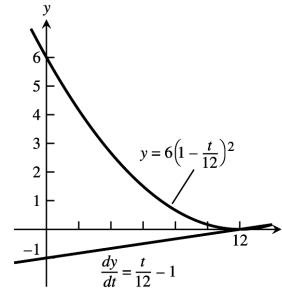


21.  $C$  = position,  $A$  = velocity, and  $B$  = acceleration. Neither  $A$  nor  $C$  can be the derivative of  $B$  because  $B$ 's derivative is constant. Graph  $C$  cannot be the derivative of  $A$  either, because  $A$  has some negative slopes while  $C$  has only positive values. So,  $C$  (being the derivative of neither  $A$  nor  $B$ ) must be the graph of position. Curve  $C$  has both positive and negative slopes, so its derivative, the velocity, must be  $A$  and not  $B$ . That leaves  $B$  for acceleration.
22.  $C$  = position,  $B$  = velocity, and  $A$  = acceleration. Curve  $C$  cannot be the derivative of either  $A$  or  $B$  because  $C$  has only negative values while both  $A$  and  $B$  have some positive slopes. So,  $C$  represents position. Curve  $C$  has no positive slopes, so its derivative, the velocity, must be  $B$ . That leaves  $A$  for acceleration. Indeed,  $A$  is negative where  $B$  has negative slopes and positive where  $B$  has positive slopes.
23. (a)  $c(100) = 11,000 \Rightarrow c_{av} = \frac{11,000}{100} = \$110$
- (b)  $c(x) = 2000 + 100x - .1x^2 \Rightarrow c'(x) = 100 - .2x$ . Marginal cost =  $c'(x) \Rightarrow$  the marginal cost of producing 100 machines is  $c'(100) = \$80$
- (c) The cost of producing the 101<sup>st</sup> machine is  $c(101) - c(100) = 100 - \frac{201}{10} = \$79.90$
24. (a)  $r(x) = 20000 \left(1 - \frac{1}{x}\right) \Rightarrow r'(x) = \frac{20000}{x^2}$ , which is marginal revenue.  $r'(100) = \frac{20000}{100^2} = \$2$ .
- (b)  $r'(101) = \$1.96$ .
- (c)  $\lim_{x \rightarrow \infty} r'(x) = \lim_{x \rightarrow \infty} \frac{20000}{x^2} = 0$ . The increase in revenue as the number of items increases without bound will approach zero.
25.  $b(t) = 10^6 + 10^4 t - 10^3 t^2 \Rightarrow b'(t) = 10^4 - (2)(10^3 t) = 10^3(10 - 2t)$
- (a)  $b'(0) = 10^4$  bacteria/hr
- (b)  $b'(5) = 0$  bacteria/hr
- (c)  $b'(10) = -10^4$  bacteria/hr
26.  $Q(t) = 200(30 - t)^2 = 200(900 - 60t + t^2) \Rightarrow Q'(t) = 200(-60 + 2t) \Rightarrow Q'(10) = -8,000$  gallons/min is the rate the water is running at the end of 10 min. Then  $\frac{Q(10) - Q(0)}{10} = -10,000$  gallons/min is the average rate the water flows during the first 10 min. The negative signs indicate water is leaving the tank.

27. (a)  $y = 6\left(1 - \frac{t}{12}\right)^2 = 6\left(1 - \frac{t}{6} + \frac{t^2}{144}\right) \Rightarrow \frac{dy}{dt} = \frac{t}{12} - 1$

(b) The largest value of  $\frac{dy}{dt}$  is 0 m/h when  $t = 12$  and the fluid level is falling the slowest at that time. The smallest value of  $\frac{dy}{dt}$  is  $-1$  m/h, when  $t = 0$ , and the fluid level is falling the fastest at that time.

(c) In this situation,  $\frac{dy}{dt} \leq 0 \Rightarrow$  the graph of  $y$  is always decreasing. As  $\frac{dy}{dt}$  increases in value, the slope of the graph of  $y$  increases from  $-1$  to 0 over the interval  $0 \leq t \leq 12$ .



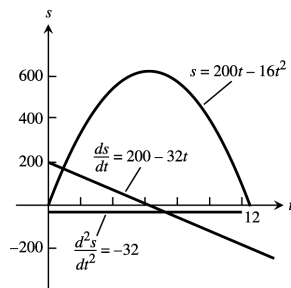
28. (a)  $V = \frac{4}{3}\pi r^3 \Rightarrow \frac{dV}{dr} = 4\pi r^2 \Rightarrow \frac{dV}{dr}\bigg|_{r=2} = 4\pi(2)^2 = 16\pi \text{ ft}^3/\text{ft}$

(b) When  $r = 2$ ,  $\frac{dV}{dr} = 16\pi$  so that when  $r$  changes by 1 unit, we expect  $V$  to change by approximately  $16\pi$ . Therefore when  $r$  changes by 0.2 units  $V$  changes by approximately  $(16\pi)(0.2) = 3.2\pi \approx 10.05 \text{ ft}^3$ . Note that  $V(2.2) - V(2) \approx 11.09 \text{ ft}^3$ .

29.  $200 \text{ km/hr} = 55 \frac{5}{9} \text{ m/sec} = \frac{500}{9} \text{ m/sec}$ , and  $D = \frac{10}{9} t^2 \Rightarrow V = \frac{20}{9} t$ . Thus  $V = \frac{500}{9} \Rightarrow \frac{20}{9} t = \frac{500}{9} \Rightarrow t = 25 \text{ sec}$ . When  $t = 25$ ,  $D = \frac{10}{9} (25)^2 = \frac{6250}{9} \text{ m}$

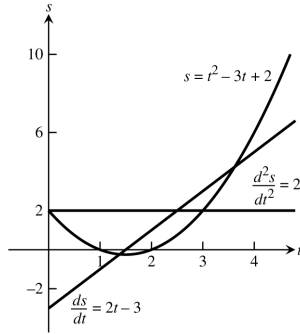
30.  $s = v_0 t - 16t^2 \Rightarrow v = v_0 - 32t$ ;  $v = 0 \Rightarrow t = \frac{v_0}{32}$ ;  $1900 = v_0 t - 16t^2$  so that  $t = \frac{v_0}{32} \Rightarrow 1900 = \frac{v_0^2}{32} - \frac{v_0^2}{64} \Rightarrow v_0 = \sqrt{(64)(1900)} = 80\sqrt{19} \text{ ft/sec}$  and, finally,  $\frac{80\sqrt{19} \text{ ft}}{\text{sec}} \cdot \frac{60 \text{ sec}}{1 \text{ min}} \cdot \frac{60 \text{ min}}{1 \text{ hr}} \cdot \frac{1 \text{ mi}}{5280 \text{ ft}} \approx 238 \text{ mph}$ .

31.



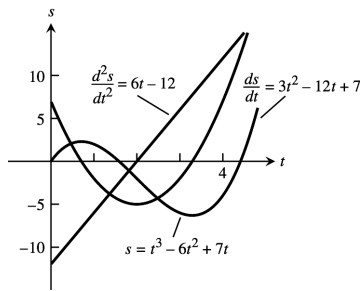
- $v = 0$  when  $t = 6.25 \text{ sec}$
- $v > 0$  when  $0 \leq t < 6.25 \Rightarrow$  body moves right (up);  $v < 0$  when  $6.25 < t \leq 12.5 \Rightarrow$  body moves left (down)
- body changes direction at  $t = 6.25 \text{ sec}$
- body speeds up on  $(6.25, 12.5]$  and slows down on  $[0, 6.25)$
- The body is moving fastest at the endpoints  $t = 0$  and  $t = 12.5$  when it is traveling  $200 \text{ ft/sec}$ . It's moving slowest at  $t = 6.25$  when the speed is 0.
- When  $t = 6.25$  the body is  $s = 625 \text{ m}$  from the origin and farthest away.

32.



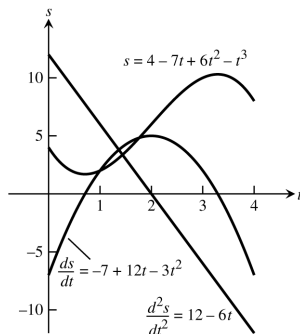
- $v = 0$  when  $t = \frac{3}{2}$  sec
- $v < 0$  when  $0 \leq t < 1.5 \Rightarrow$  body moves left (down);  $v > 0$  when  $1.5 < t \leq 5 \Rightarrow$  body moves right (up)
- body changes direction at  $t = \frac{3}{2}$  sec
- body speeds up on  $(\frac{3}{2}, 5]$  and slows down on  $[0, \frac{3}{2})$
- body is moving fastest at  $t = 5$  when the speed  $= |v(5)| = 7$  units/sec; it is moving slowest at  $t = \frac{3}{2}$  when the speed is 0
- When  $t = 5$  the body is  $s = 12$  units from the origin and farthest away.

33.



- $v = 0$  when  $t = \frac{6 \pm \sqrt{15}}{3}$  sec
- $v < 0$  when  $\frac{6 - \sqrt{15}}{3} < t < \frac{6 + \sqrt{15}}{3} \Rightarrow$  body moves left (down);  $v > 0$  when  $0 \leq t < \frac{6 - \sqrt{15}}{3}$  or  $\frac{6 + \sqrt{15}}{3} < t \leq 4 \Rightarrow$  body moves right (up)
- body changes direction at  $t = \frac{6 \pm \sqrt{15}}{3}$  sec
- body speeds up on  $(\frac{6 - \sqrt{15}}{3}, 2) \cup (\frac{6 + \sqrt{15}}{3}, 4]$  and slows down on  $[0, \frac{6 - \sqrt{15}}{3}) \cup (2, \frac{6 + \sqrt{15}}{3})$ .
- The body is moving fastest at  $t = 0$  and  $t = 4$  when it is moving 7 units/sec and slowest at  $t = \frac{6 \pm \sqrt{15}}{3}$  sec
- When  $t = \frac{6 + \sqrt{15}}{3}$  the body is at position  $s \approx -6.303$  units and farthest from the origin.

34.



- $v = 0$  when  $t = \frac{6 \pm \sqrt{15}}{3}$

- (b)  $v < 0$  when  $0 \leq t < \frac{6-\sqrt{15}}{3}$  or  $\frac{6+\sqrt{15}}{3} < t \leq 4 \Rightarrow$  body is moving left (down);  $v > 0$  when  $\frac{6-\sqrt{15}}{3} < t < \frac{6+\sqrt{15}}{3} \Rightarrow$  body is moving right (up)
- (c) body changes direction at  $t = \frac{6 \pm \sqrt{15}}{3}$  sec
- (d) body speeds up on  $\left(\frac{6-\sqrt{15}}{3}, 2\right) \cup \left(\frac{6+\sqrt{15}}{3}, 4\right]$  and slows down on  $\left[0, \frac{6-\sqrt{15}}{3}\right) \cup \left(2, \frac{6+\sqrt{15}}{3}\right)$
- (e) The body is moving fastest at 7 units/sec when  $t = 0$  and  $t = 4$ ; it is moving slowest and stationary at  $t = \frac{6 \pm \sqrt{15}}{3}$
- (f) When  $t = \frac{6+\sqrt{15}}{3}$  the position is  $s \approx 10.303$  units and the body is farthest from the origin.

### 3.5 DERIVATIVES OF TRIGONOMETRIC FUNCTIONS

- $y = -10x + 3 \cos x \Rightarrow \frac{dy}{dx} = -10 + 3 \frac{d}{dx}(\cos x) = -10 - 3 \sin x$
- $y = \frac{3}{x} + 5 \sin x \Rightarrow \frac{dy}{dx} = \frac{-3}{x^2} + 5 \frac{d}{dx}(\sin x) = \frac{-3}{x^2} + 5 \cos x$
- $y = x^2 \cos x \Rightarrow \frac{dy}{dx} = x^2(-\sin x) + 2x \cos x = -x^2 \sin x + 2x \cos x$
- $y = \sqrt{x} \sec x + 3 \Rightarrow \frac{dy}{dx} = \sqrt{x} \sec x \tan x + \frac{\sec x}{2\sqrt{x}} + 0 = \sqrt{x} \sec x \tan x + \frac{\sec x}{2\sqrt{x}}$
- $y = \csc x - 4\sqrt{x} + 7 \Rightarrow \frac{dy}{dx} = -\csc x \cot x - \frac{4}{2\sqrt{x}} + 0 = -\csc x \cot x - \frac{2}{\sqrt{x}}$
- $y = x^2 \cot x - \frac{1}{x^2} \Rightarrow \frac{dy}{dx} = x^2 \frac{d}{dx}(\cot x) + \cot x \cdot \frac{d}{dx}(x^2) + \frac{2}{x^3} = -x^2 \csc^2 x + (\cot x)(2x) + \frac{2}{x^3} = -x^2 \csc^2 x + 2x \cot x + \frac{2}{x^3}$
- $f(x) = \sin x \tan x \Rightarrow f'(x) = \sin x \sec^2 x + \cos x \tan x = \sin x \sec^2 x + \cos x \frac{\sin x}{\cos x} = \sin x(\sec^2 x + 1)$
- $g(x) = \csc x \cot x \Rightarrow g'(x) = \csc x(-\csc^2 x) + (-\csc x \cot x) \cot x = -\csc^3 x - \csc x \cot^2 x = -\csc x(\csc^2 x + \cot^2 x)$
- $y = (\sec x + \tan x)(\sec x - \tan x) \Rightarrow \frac{dy}{dx} = (\sec x + \tan x) \frac{d}{dx}(\sec x - \tan x) + (\sec x - \tan x) \frac{d}{dx}(\sec x + \tan x)$   
 $= (\sec x + \tan x)(\sec x \tan x - \sec^2 x) + (\sec x - \tan x)(\sec x \tan x + \sec^2 x)$   
 $= (\sec^2 x \tan x + \sec x \tan^2 x - \sec^3 x - \sec^2 x \tan x) + (\sec^2 x \tan x - \sec x \tan^2 x + \sec^3 x - \tan x \sec^2 x) = 0.$   
 (Note also that  $y = \sec^2 x - \tan^2 x = (\tan^2 x + 1) - \tan^2 x = 1 \Rightarrow \frac{dy}{dx} = 0.$ )
- $y = (\sin x + \cos x) \sec x \Rightarrow \frac{dy}{dx} = (\sin x + \cos x) \frac{d}{dx}(\sec x) + \sec x \frac{d}{dx}(\sin x + \cos x)$   
 $= (\sin x + \cos x)(\sec x \tan x) + (\sec x)(\cos x - \sin x) = \frac{(\sin x + \cos x) \sin x}{\cos^2 x} + \frac{\cos x - \sin x}{\cos x}$   
 $= \frac{\sin^2 x + \cos x \sin x + \cos^2 x - \cos x \sin x}{\cos^2 x} = \frac{1}{\cos^2 x} = \sec^2 x$   
 (Note also that  $y = \sin x \sec x + \cos x \sec x = \tan x + 1 \Rightarrow \frac{dy}{dx} = \sec^2 x.$ )
- $y = \frac{\cot x}{1 + \cot x} \Rightarrow \frac{dy}{dx} = \frac{(1 + \cot x) \frac{d}{dx}(\cot x) - (\cot x) \frac{d}{dx}(1 + \cot x)}{(1 + \cot x)^2} = \frac{(1 + \cot x)(-\csc^2 x) - (\cot x)(-\csc^2 x)}{(1 + \cot x)^2}$   
 $= \frac{-\csc^2 x - \csc^2 x \cot x + \csc^2 x \cot x}{(1 + \cot x)^2} = \frac{-\csc^2 x}{(1 + \cot x)^2}$
- $y = \frac{\cos x}{1 + \sin x} \Rightarrow \frac{dy}{dx} = \frac{(1 + \sin x) \frac{d}{dx}(\cos x) - (\cos x) \frac{d}{dx}(1 + \sin x)}{(1 + \sin x)^2} = \frac{(1 + \sin x)(-\sin x) - (\cos x)(\cos x)}{(1 + \sin x)^2}$   
 $= \frac{-\sin x - \sin^2 x - \cos^2 x}{(1 + \sin x)^2} = \frac{-\sin x - 1}{(1 + \sin x)^2} = \frac{-(1 + \sin x)}{(1 + \sin x)^2} = \frac{-1}{1 + \sin x}$

$$13. y = \frac{4}{\cos x} + \frac{1}{\tan x} = 4 \sec x + \cot x \Rightarrow \frac{dy}{dx} = 4 \sec x \tan x - \csc^2 x$$

$$14. y = \frac{\cos x}{x} + \frac{x}{\cos x} \Rightarrow \frac{dy}{dx} = \frac{x(-\sin x) - (\cos x)(1)}{x^2} + \frac{(\cos x)(1) - x(-\sin x)}{\cos^2 x} = \frac{-x \sin x - \cos x}{x^2} + \frac{\cos x + x \sin x}{\cos^2 x}$$

$$15. y = x^2 \sin x + 2x \cos x - 2 \sin x \Rightarrow \frac{dy}{dx} = (x^2 \cos x + (\sin x)(2x)) + ((2x)(-\sin x) + (\cos x)(2)) - 2 \cos x \\ = x^2 \cos x + 2x \sin x - 2x \sin x + 2 \cos x - 2 \cos x = x^2 \cos x$$

$$16. y = x^2 \cos x - 2x \sin x - 2 \cos x \Rightarrow \frac{dy}{dx} = (x^2(-\sin x) + (\cos x)(2x)) - (2x \cos x + (\sin x)(2)) - 2(-\sin x) \\ = -x^2 \sin x + 2x \cos x - 2x \cos x - 2 \sin x + 2 \sin x = -x^2 \sin x$$

$$17. f(x) = x^3 \sin x \cos x \Rightarrow f'(x) = x^3 \sin x(-\sin x) + x^3 \cos x(\cos x) + 3x^2 \sin x \cos x = -x^3 \sin^2 x + x^3 \cos^2 x + 3x^2 \sin x \cos x$$

$$18. g(x) = (2 - x) \tan^2 x \Rightarrow g'(x) = (2 - x)(2 \tan x \sec^2 x) + (-1) \tan^2 x = 2(2 - x) \tan x \sec^2 x - \tan^2 x \\ = 2(2 - x) \tan x (\sec^2 x - \tan x)$$

$$19. s = \tan t - t \Rightarrow \frac{ds}{dt} = \sec^2 t - 1$$

$$20. s = t^2 - \sec t + 1 \Rightarrow \frac{ds}{dt} = 2t - \sec t \tan t$$

$$21. s = \frac{1 + \csc t}{1 - \csc t} \Rightarrow \frac{ds}{dt} = \frac{(1 - \csc t)(-\csc t \cot t) - (1 + \csc t)(\csc t \cot t)}{(1 - \csc t)^2} \\ = \frac{-\csc t \cot t + \csc^2 t \cot t - \csc t \cot t - \csc^2 t \cot t}{(1 - \csc t)^2} = \frac{-2 \csc t \cot t}{(1 - \csc t)^2}$$

$$22. s = \frac{\sin t}{1 - \cos t} \Rightarrow \frac{ds}{dt} = \frac{(1 - \cos t)(\cos t) - (\sin t)(\sin t)}{(1 - \cos t)^2} = \frac{\cos t - \cos^2 t - \sin^2 t}{(1 - \cos t)^2} = \frac{\cos t - 1}{(1 - \cos t)^2} = -\frac{1}{1 - \cos t} = \frac{1}{\cos t - 1}$$

$$23. r = 4 - \theta^2 \sin \theta \Rightarrow \frac{dr}{d\theta} = -(\theta^2 \frac{d}{d\theta}(\sin \theta) + (\sin \theta)(2\theta)) = -(\theta^2 \cos \theta + 2\theta \sin \theta) = -\theta(\theta \cos \theta + 2 \sin \theta)$$

$$24. r = \theta \sin \theta + \cos \theta \Rightarrow \frac{dr}{d\theta} = (\theta \cos \theta + (\sin \theta)(1)) - \sin \theta = \theta \cos \theta$$

$$25. r = \sec \theta \csc \theta \Rightarrow \frac{dr}{d\theta} = (\sec \theta)(-\csc \theta \cot \theta) + (\csc \theta)(\sec \theta \tan \theta) \\ = \left(\frac{1}{\cos \theta}\right) \left(\frac{1}{\sin \theta}\right) \left(\frac{\cos \theta}{\sin \theta}\right) + \left(\frac{1}{\sin \theta}\right) \left(\frac{1}{\cos \theta}\right) \left(\frac{\sin \theta}{\cos \theta}\right) = \frac{-1}{\sin^2 \theta} + \frac{1}{\cos^2 \theta} = \sec^2 \theta - \csc^2 \theta$$

$$26. r = (1 + \sec \theta) \sin \theta \Rightarrow \frac{dr}{d\theta} = (1 + \sec \theta) \cos \theta + (\sin \theta)(\sec \theta \tan \theta) = (\cos \theta + 1) + \tan^2 \theta = \cos \theta + \sec^2 \theta$$

$$27. p = 5 + \frac{1}{\cot q} = 5 + \tan q \Rightarrow \frac{dp}{dq} = \sec^2 q$$

$$28. p = (1 + \csc q) \cos q \Rightarrow \frac{dp}{dq} = (1 + \csc q)(-\sin q) + (\cos q)(-\csc q \cot q) = (-\sin q - 1) - \cot^2 q = -\sin q - \csc^2 q$$

$$29. p = \frac{\sin q + \cos q}{\cos q} \Rightarrow \frac{dp}{dq} = \frac{(\cos q)(\cos q - \sin q) - (\sin q + \cos q)(-\sin q)}{\cos^2 q} \\ = \frac{\cos^2 q - \cos q \sin q + \sin^2 q + \cos q \sin q}{\cos^2 q} = \frac{1}{\cos^2 q} = \sec^2 q$$

$$30. p = \frac{\tan q}{1 + \tan q} \Rightarrow \frac{dp}{dq} = \frac{(1 + \tan q)(\sec^2 q) - (\tan q)(\sec^2 q)}{(1 + \tan q)^2} = \frac{\sec^2 q + \tan q \sec^2 q - \tan q \sec^2 q}{(1 + \tan q)^2} = \frac{\sec^2 q}{(1 + \tan q)^2}$$

$$31. p = \frac{q \sin q}{q^2 - 1} \Rightarrow \frac{dp}{dq} = \frac{(q^2 - 1)(q \cos q + \sin q(1)) - (q \sin q)(2q)}{(q^2 - 1)^2} = \frac{q^3 \cos q + q^2 \sin q - q \cos q - \sin q - 2q^2 \sin q}{(q^2 - 1)^2} \\ = \frac{q^3 \cos q - q^2 \sin q - q \cos q - \sin q}{(q^2 - 1)^2}$$